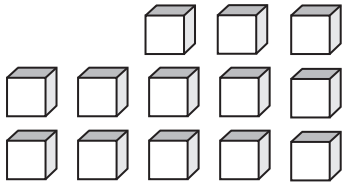


**Counting Units**

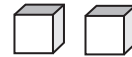
Write the number formed by base ten blocks

1)



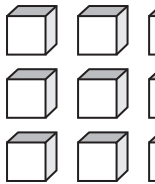
\_\_\_\_\_

2)

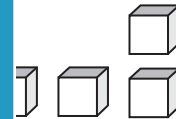


\_\_\_\_\_

3)

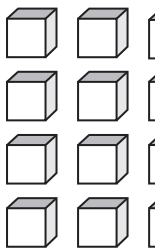


\_\_\_\_\_

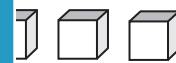


\_\_\_\_\_

5)



\_\_\_\_\_



\_\_\_\_\_

**PREVIEW**

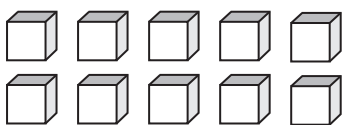
Gain complete access to the largest collection of worksheets in all subjects!

Members, please log in to download this worksheet.

Not a member? Please sign up to gain complete access.

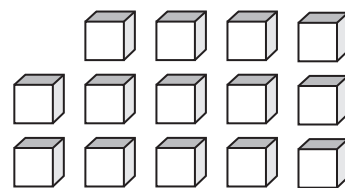
[www.mathworksheets4kids.com](http://www.mathworksheets4kids.com)

7)



\_\_\_\_\_

8)



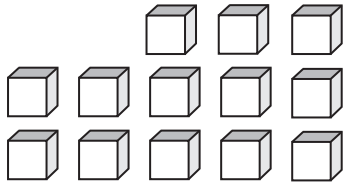
\_\_\_\_\_

**Answer key****Counting Units**

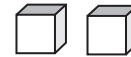
Sheet 4

Write the number formed by base ten blocks

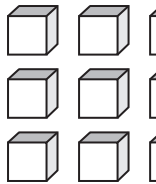
1)

13

2)

2

3)

12

# PREVIEW

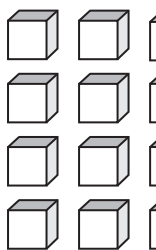
Gain complete access to the largest  
collection of worksheets in all subjects!

Members, please  
log in to  
download this  
worksheet.

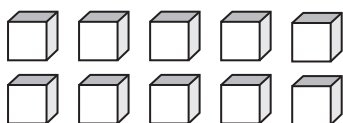
Not a member?  
Please sign up to  
gain complete  
access.

[www.mathworksheets4kids.com](http://www.mathworksheets4kids.com)

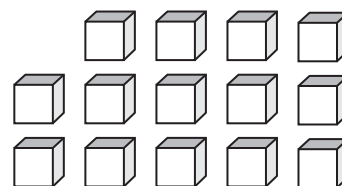
5)

14

7)

10

8)

14