


Subtraction

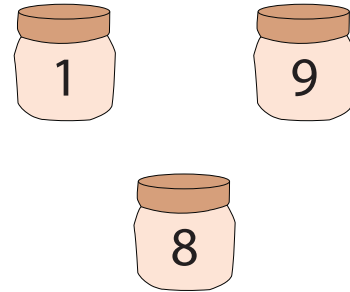
Sheet 3

Circle two numbers that need to be subtracted in each set to arrive at the answer (indicated as the third number).

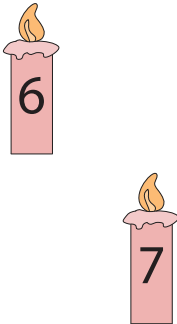
1)



2)



3)



PREVIEW

Gain complete access to the largest collection of worksheets in all subjects!

Members, please log in to download this worksheet.

Not a member? Please sign up to gain complete access.

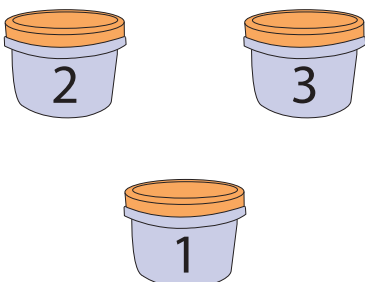
www.mathworksheets4kids.com



5)



7)



8)

