



**Cross out & Count**

Subtraction within 10: S1


Complete the subtraction sentences that represent the picture models.



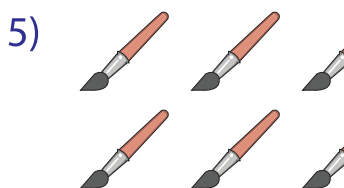
$6 - 3 = \underline{\quad}$




$9 - 5 = \underline{\quad}$




$4 - 1 = \underline{\quad}$



$8 - 6 = \underline{\quad}$



$10 - 4 = \underline{\quad}$




$5 - 2 = \underline{\quad}$

# PREVIEW


Gain complete access to the largest collection of worksheets in all subjects!

Members, please log in to download this worksheet.

Not a member? Please sign up to gain complete access.

[www.mathworksheets4kids.com](http://www.mathworksheets4kids.com)

$= \underline{\quad}$



$= \underline{\quad}$