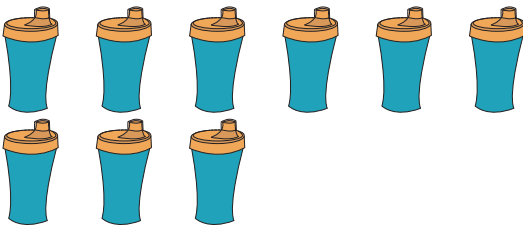




Cross out & Count

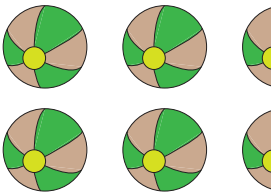
Subtraction within 10: S3

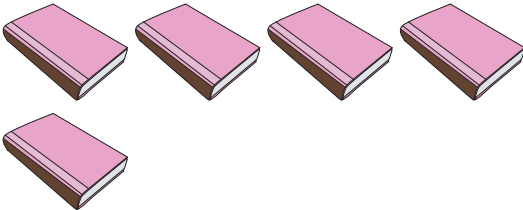
Complete the subtraction sentences that represent the picture models.

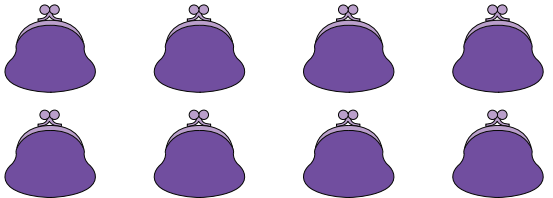
1) 
 $9 - 4 = \underline{\quad}$

2) 
 $3 - 2 = \underline{\quad}$

3) 
 $3 - 1 = \underline{\quad}$

5) 
 $10 - 7 = \underline{\quad}$

7) 
 $5 - 3 = \underline{\quad}$

8) 
 $8 - 1 = \underline{\quad}$


PREVIEW


Gain complete access to the largest collection of worksheets in all subjects!

Members, please log in to download this worksheet.

Not a member? Please sign up to gain complete access.

www.mathworksheets4kids.com


 $= \underline{\quad}$


 $= \underline{\quad}$