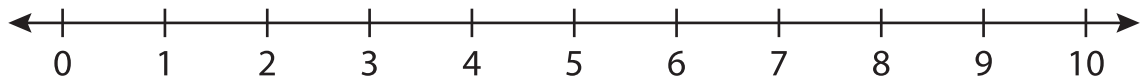


**Number Line Subtraction**

0-10: S1

Indicate hops on each number line and complete the subtraction sentences.

1)  $7 - 4 =$  \_\_\_\_\_



2)  $9 - 2 =$  \_\_\_\_\_



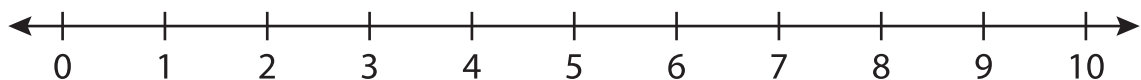
3)  $10 - 9 =$  \_\_\_\_\_



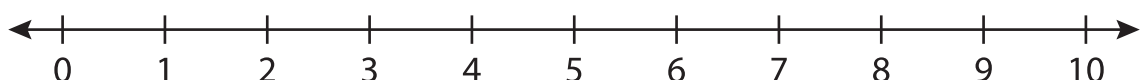
4)  $3 - 1 =$  \_\_\_\_\_



5)  $8 - 3 =$  \_\_\_\_\_



6)  $6 - 6 =$  \_\_\_\_\_

**PREVIEW**Gain complete access to the largest  
collection of worksheets in all subjects!Members, please  
log in to  
download this  
worksheet.Not a member?  
Please sign up to  
gain complete  
access.[www.mathworksheets4kids.com](http://www.mathworksheets4kids.com)