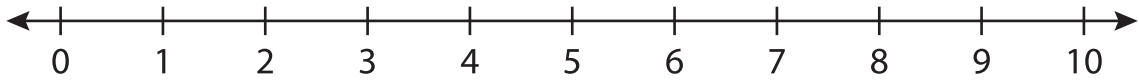


Number Line Subtraction

0-10: S2

Indicate hops on each number line and complete the subtraction sentences.

1) $5 - 1 =$ _____



2) $8 - 6 =$ _____



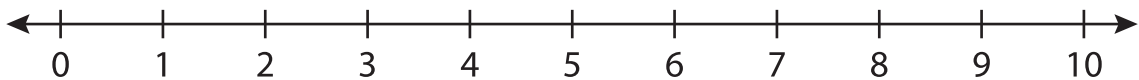
3) $4 - 3 =$ _____



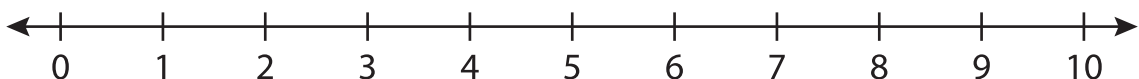
4) $9 - 4 =$ _____



5) $2 - 2 =$ _____



6) $10 - 7 =$ _____



PREVIEW

Gain complete access to the largest collection of worksheets in all subjects!

Members, please log in to download this worksheet.

Not a member? Please sign up to gain complete access.

www.mathworksheets4kids.com