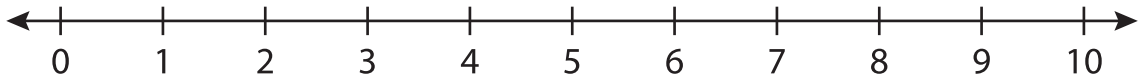


Number Line Subtraction

0-10: S3

Indicate hops on each number line and complete the subtraction sentences.

1) $9 - 8 =$ _____



2) $1 - 1 =$ _____



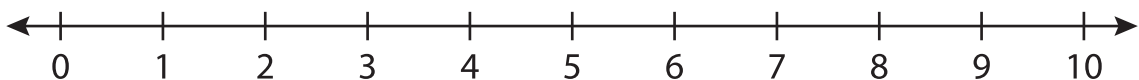
3) $6 - 4 =$ _____



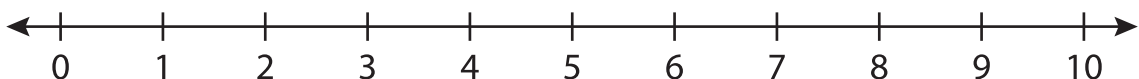
4) $8 - 2 =$ _____



5) $10 - 5 =$ _____



6) $7 - 3 =$ _____



PREVIEW

Gain complete access to the largest collection of worksheets in all subjects!

Members, please log in to download this worksheet.

Not a member? Please sign up to gain complete access.

www.mathworksheets4kids.com