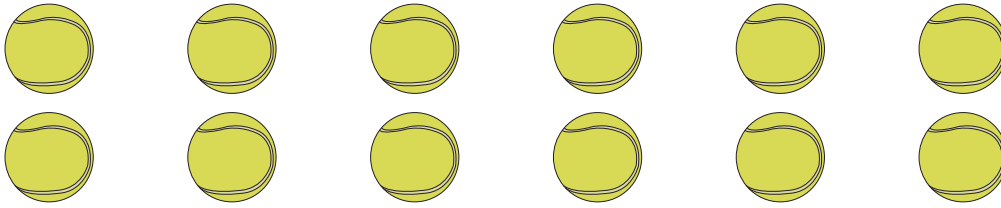


## Picture Subtraction

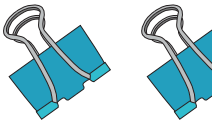
Fact 1-10: S1

- 1) Cross out 8 tennis balls. How many are left?



$$12 - 8 = \underline{\quad}$$

- 2) Cross out 3 binder clips. How many are left?




$$8 -$$

- 3) Cross out 1 pin



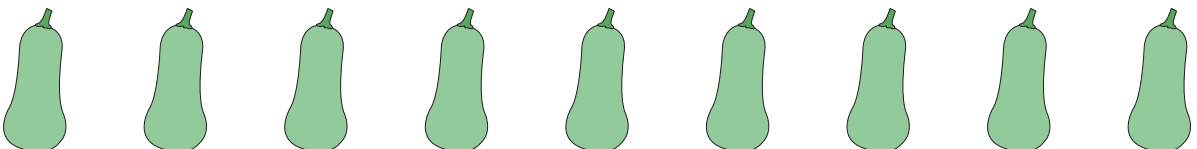
$$3 -$$

- 4) Cross out 7 candles



$$13 - 7 = \underline{\quad}$$

- 5) Cross out 2 bottle gourds. How many are left?



$$9 - 2 = \underline{\quad}$$

**PREVIEW**

Gain complete access to the largest collection of worksheets in all subjects!

Members, please log in to download this worksheet.

Not a member? Please sign up to gain complete access.

[www.mathworksheets4kids.com](http://www.mathworksheets4kids.com)