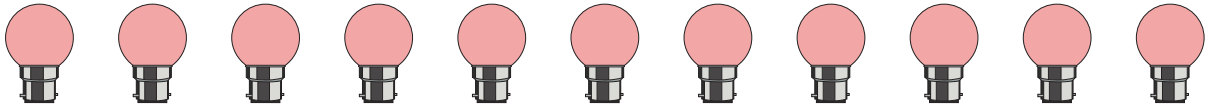


Picture Subtraction


Fact 1-10: S2

- 1) Cross out 9 bulbs. How many are left?



$$11 - 9 = \underline{\quad}$$

- 2) Cross out 1 parrot. How many are left?



$$2 - \quad = \quad$$

- 3) Cross out 10 mushrooms.




$$15 - \quad = \quad$$

- 4) Cross out 2 bottles of glue.



$$5 - 2 = \underline{\quad}$$

- 5) Cross out 6 highlighters. How many are left?



$$10 - 6 = \underline{\quad}$$

PREVIEW

Gain complete access to the largest collection of worksheets in all subjects!

Members, please log in to download this worksheet.

Not a member? Please sign up to gain complete access.

www.mathworksheets4kids.com

