


Subtraction Sentence

Subtraction within 10: S1

Write subtraction sentences based on the number of items displayed in each row.

1)



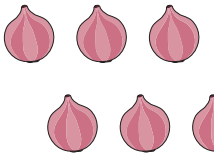
—



—

=

2)



PREVIEW

Gain complete access to the largest collection of worksheets in all subjects!


Members, please log in to download this worksheet.

Not a member? Please sign up to gain complete access.

www.mathworksheets4kids.com

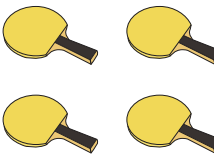
=

3)




=

4)



=

5)



—



—

=
