


# Subtraction Sentence

Subtraction within 10: S2

Write subtraction sentences based on the number of items displayed in each row.

1)



-



\_\_\_\_\_

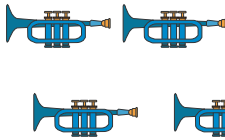
-

\_\_\_\_\_

=

\_\_\_\_\_

2)



\_\_\_\_\_

# PREVIEW

Gain complete access to the largest collection of worksheets in all subjects!

Members, please log in to download this worksheet.

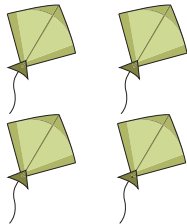
Not a member? Please sign up to gain complete access.

[www.mathworksheets4kids.com](http://www.mathworksheets4kids.com)

=

\_\_\_\_\_

3)



\_\_\_\_\_

=

\_\_\_\_\_

4)



\_\_\_\_\_


-

\_\_\_\_\_

=

\_\_\_\_\_

5)



\_\_\_\_\_

-



\_\_\_\_\_

=

\_\_\_\_\_