


# Subtraction Sentence

Subtraction within 10: S3

Write subtraction sentences based on the number of items displayed in each row.

1)



—



—

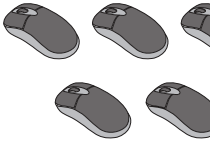
=

\_\_\_\_\_

\_\_\_\_\_

\_\_\_\_\_

2)




\_\_\_\_\_

=

\_\_\_\_\_

3)



\_\_\_\_\_

=

\_\_\_\_\_

4)




\_\_\_\_\_

=

\_\_\_\_\_

5)



—



—

=

\_\_\_\_\_

\_\_\_\_\_

\_\_\_\_\_

## PREVIEW

Gain complete access to the largest collection of worksheets in all subjects!

Members, please log in to download this worksheet.

Not a member? Please sign up to gain complete access.

www.mathworksheets4kids.com