

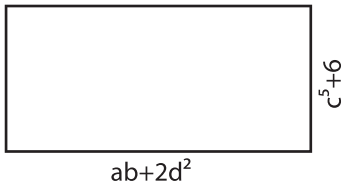
Name : _____

Algebra: Measurement

Multi Variables: S2

Find the measurement.

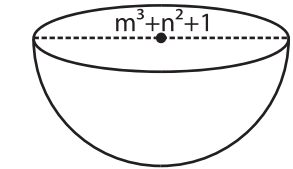
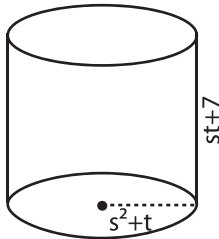
1) $a = 2, b = -3, c = 1, d = 3$



Length = _____

Width = _____

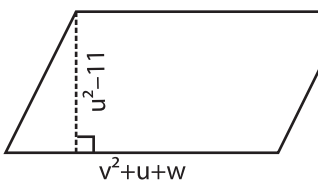
2) $s = -1, t = 1$



Radius = _____

Diameter = _____

4) $u = 4, v = -2, w = 2$



Base = _____

Height = _____

PREVIEW

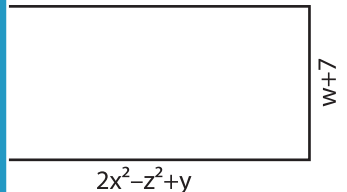
Gain complete access to the largest collection of worksheets in all subjects!

Members, please log in to download this worksheet.

Not a member? Please sign up to gain complete access.

www.mathworksheets4kids.com

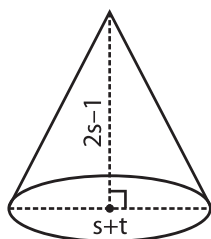
$w = 1, x = 3, y = -1, z = 2$



Length = _____

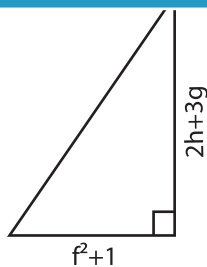
Width = _____

7) $s = 5, t = 3$



Diameter = _____

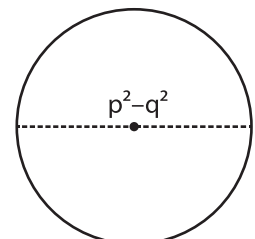
Height = _____



Base = _____

Height = _____

$p = 5, q = -3$



Radius = _____

Diameter = _____