

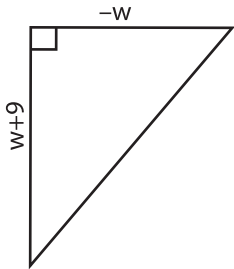
Name : \_\_\_\_\_

# Algebra: Measurement

Single Variable: S5

Find the measurement.

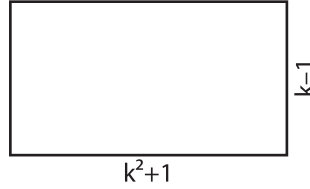
1)  $w = -4$



Height = \_\_\_\_\_

Base = \_\_\_\_\_

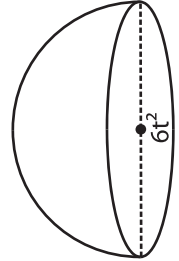
2)  $k = 5$



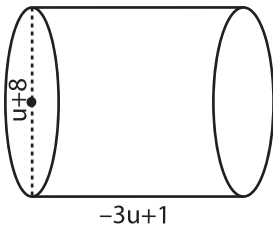
Diameter = \_\_\_\_\_

Radius = \_\_\_\_\_

3)  $t = -1$



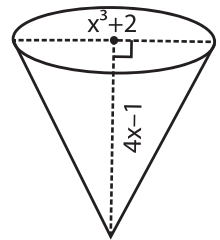
4)  $u = -6$



Diameter = \_\_\_\_\_

Height = \_\_\_\_\_

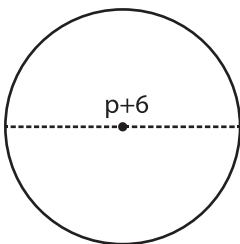
$x = 2$



Radius = \_\_\_\_\_

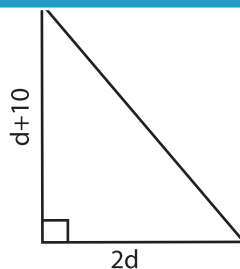
Height = \_\_\_\_\_

7)  $p = 8$



Diameter = \_\_\_\_\_

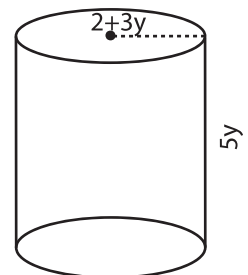
Radius = \_\_\_\_\_



Base = \_\_\_\_\_

Height = \_\_\_\_\_

$y = 4$



Height = \_\_\_\_\_

Radius = \_\_\_\_\_

**PREVIEW**

Gain complete access to the largest collection of worksheets in all subjects!

Members, please log in to download this worksheet.

Not a member? Please sign up to gain complete access.

[www.mathworksheets4kids.com](http://www.mathworksheets4kids.com)