

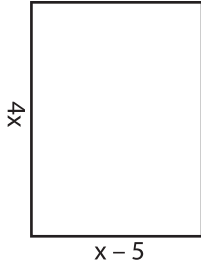
Name : _____

Area & Perimeter

Sheet 4

Find the area and perimeter of each rectangle.

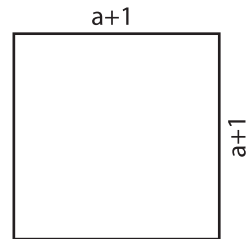
1)



Area = _____

Perimeter = _____

2)



Area = _____

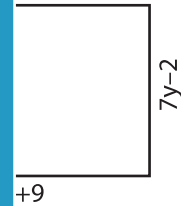
Perimeter = _____

3)



Area = _____

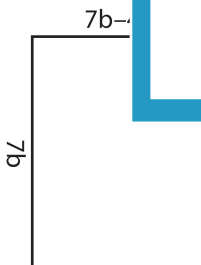
Perimeter = _____



Area = _____

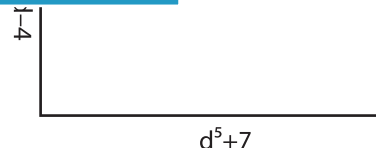
Perimeter = _____

5)



Area = _____

Perimeter = _____



Area = _____

Perimeter = _____

PREVIEW

Gain complete access to the largest collection of worksheets in all subjects!

Members, please log in to download this worksheet.

Not a member? Please sign up to gain complete access.

www.mathworksheets4kids.com