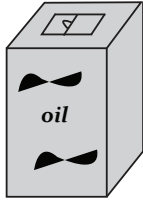


Capacity Estimation

Metric Units: S2

Estimate the capacity of each object.

1)



- 3 L
- 300 mL
- 30 L

2)



- 10 L
- 100 L
- 1 L

3)

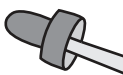


- 5 L
- 500 mL



- 75 mL
- 7.5 L

5)



- 1 mL
- 10 mL



- 1 L
- 2 L

PREVIEW

Gain complete access to the largest collection of worksheets in all subjects!

Members, please log in to download this worksheet.

Not a member? Please sign up to gain complete access.

www.mathworksheets4kids.com

7)



- 7.5 mL
- 750 mL
- 75 mL

8)



- 20 L
- 200 mL
- 20 mL

Answer key**Capacity Estimation**

Metric Units: S2

Estimate the capacity of each object.

1)



- **3 L**
- 300 mL
- 30 L

2)



- 10 L
- 100 L
- **1 L**

3)

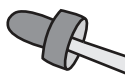


- 5 L
- **50**



- mL
- 7.5 L

5)



- **1 mL**
- 10



- L
- 2 L

PREVIEW

Gain complete access to the largest collection of worksheets in all subjects!

Members, please log in to download this worksheet.

Not a member? Please sign up to gain complete access.

www.mathworksheets4kids.com

7)



- 7.5 mL
- 750 mL
- **75 mL**

8)



- 20 L
- **200 mL**
- 20 mL