

Capacity - More/Less

Metric Units: S1


Choose the correct choice that best estimates the capacity of each object.

1)



- Less than 75 mL
 More than 75 mL

2)




- Less than 2 L
 More than 2 L

3)



- Less than 50 mL
 More than 50 mL

4)



- Less than 500 mL
 More than 500 mL

5)



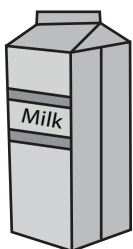
- Less than 1 L
 More than 1 L

6)



- Less than 2 L
 More than 2 L

7)



- Less than 100 mL
 More than 100 mL

8)



- Less than 500 mL
 More than 500 mL

Answer key**Capacity - More/Less**

Metric Units: S1


Choose the correct choice that best estimates the capacity of each object.

1)



- Less than 75 mL
 More than 75 mL

2)




- Less than 2 L
 More than 2 L

3)



- Less than 50 mL
 More than 50 mL

4)



- Less than 500 mL
 More than 500 mL

5)



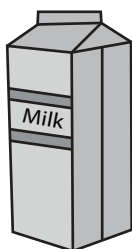
- Less than 1 L
 More than 1 L

6)



- Less than 2 L
 More than 2 L

7)



- Less than 100 mL
 More than 100 mL

8)



- Less than 500 mL
 More than 500 mL