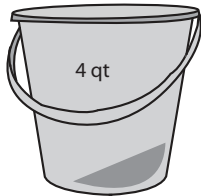


Measuring Capacity


Customary Units: S2

Calculate the capacity.

1)




=



Capacity of each  = _____ qt

2)



=


PREVIEW

Gain complete access to the largest collection of worksheets in all subjects!

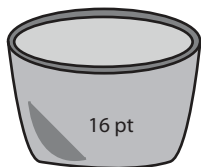
Members, please log in to download this worksheet.

Not a member? Please sign up to gain complete access.


www.mathworksheets4kids.com

each  = _____ fl.oz

3)




=

each  = _____ pt

4)



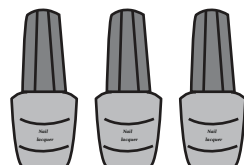
=

each  = _____ c

5)



=



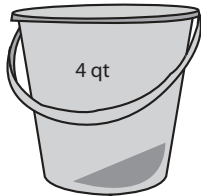
Capacity of each  = _____ tsp

Answer key**Measuring Capacity**


Customary Units: S2

Calculate the capacity.


1)



=

Capacity of each  = 2 qt

2)



=

PREVIEW

Gain complete access to the largest collection of worksheets in all subjects!

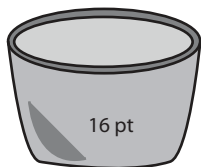
Members, please log in to download this worksheet.

Not a member? Please sign up to gain complete access.


www.mathworksheets4kids.com

each  = 3 fl.oz

3)




=

each  = 4 pt

4)



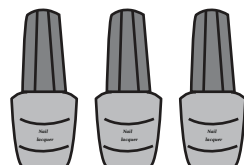
=

each  = 1 c

5)



=

Capacity of each  = 2 tsp