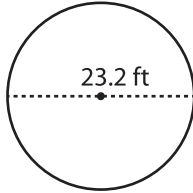


**Radius / Diameter**

Moderate: S3

Find the radius or diameter of each circle.

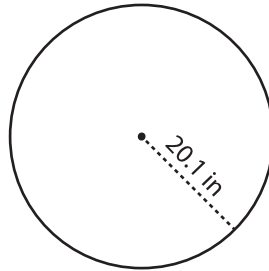
1)



Radius = \_\_\_\_\_

Diameter = \_\_\_\_\_

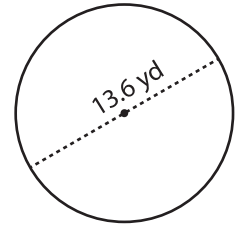
2)



Radius = \_\_\_\_\_

Diameter = \_\_\_\_\_

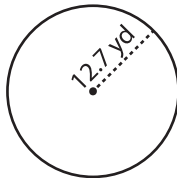
3)



Radius = \_\_\_\_\_

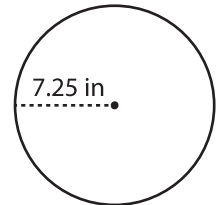
Diameter = \_\_\_\_\_

4)



Radius = \_\_\_\_\_

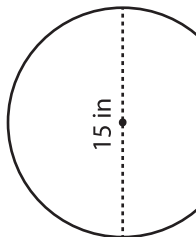
Diameter = \_\_\_\_\_

**PREVIEW**Gain complete access to the largest  
collection of worksheets in all subjects!Members, please  
log in to  
download this  
worksheet.Not a member?  
Please sign up to  
gain complete  
access.[www.mathworksheets4kids.com](http://www.mathworksheets4kids.com)

Radius = \_\_\_\_\_

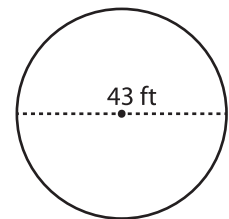
Diameter = \_\_\_\_\_

7)



Radius = \_\_\_\_\_

Diameter = \_\_\_\_\_



Radius = \_\_\_\_\_

Diameter = \_\_\_\_\_

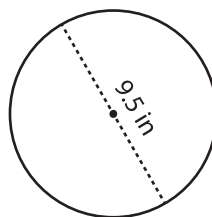
10)



Radius = \_\_\_\_\_

Diameter = \_\_\_\_\_

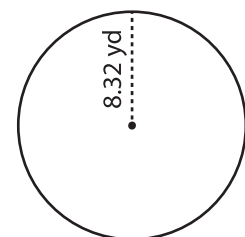
11)



Radius = \_\_\_\_\_

Diameter = \_\_\_\_\_

12)



Radius = \_\_\_\_\_

Diameter = \_\_\_\_\_