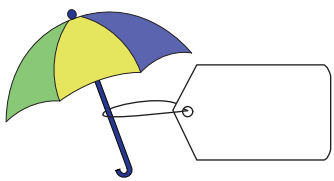




Name : \_\_\_\_\_

## Missing Amount

Sheet 3

A) Find the missing marked price, selling price, or discount.

S.No	Marked price	Discount	Selling price
1)		\$2	\$12
2)			\$289
3)			

PREVIEW

Gain complete access to the largest collection of worksheets in all subjects!

Members, please log in to download this worksheet.

Not a member? Please sign up to gain complete access.

[www.mathworksheets4kids.com](http://www.mathworksheets4kids.com)

B) Find the missing

S.No	Marked price	Discount	Selling price
1)	\$		
2)		\$170	\$1,885
3)	\$30,080	\$99	
4)	\$723		\$675