

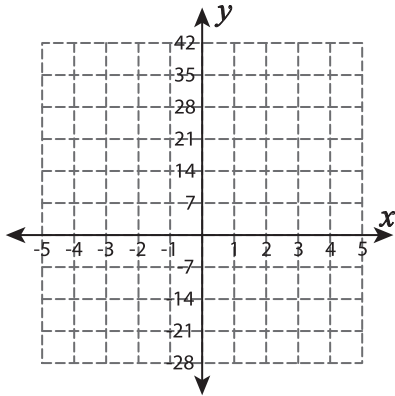
Function Table

T2L1S1

Complete the function table. Plot the points and graph the line.

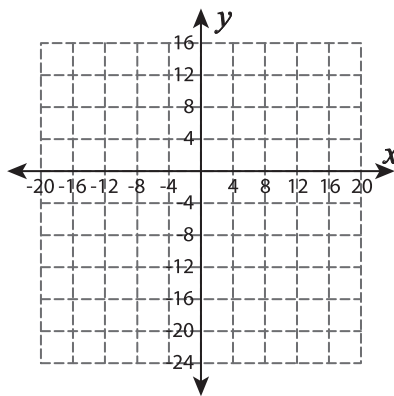
1) $f(x) = 7x$

x		2		4	5
$f(x)$	7		21		



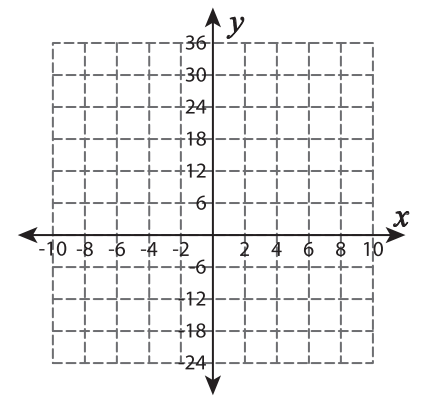
2) $f(x) = -x - 8$

x	-4		8		16
$f(x)$		-12		-20	



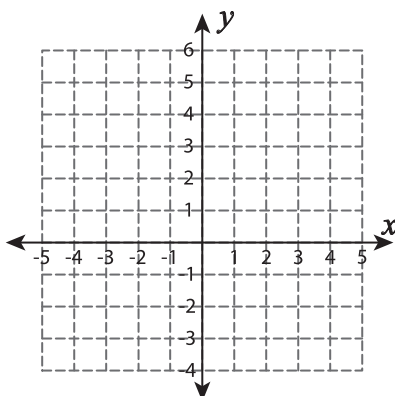
3) $f(x) = 6 - 3x$

x	-10		-6		-2
$f(x)$		30		18	



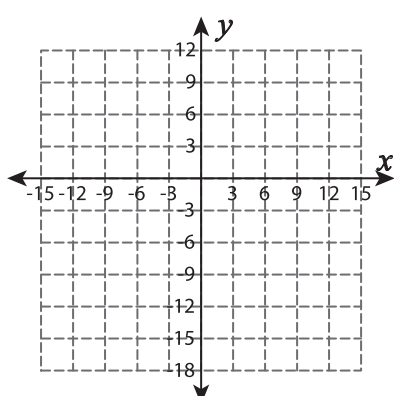
4) $f(x) = x + 4$

x		-1		1	
$f(x)$	2		4		6



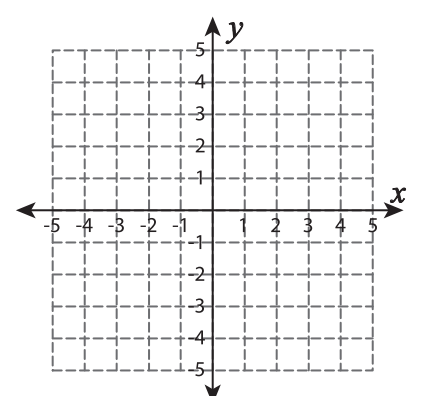
5) $f(x) = -9 - x$

x	-6	-3	0		6
$f(x)$				-12	



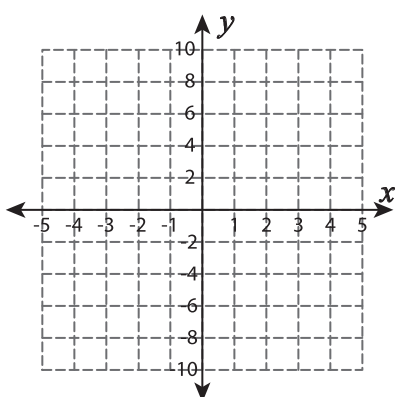
6) $f(x) = -2x + 5$

x			3	4	
$f(x)$	5	3			-5



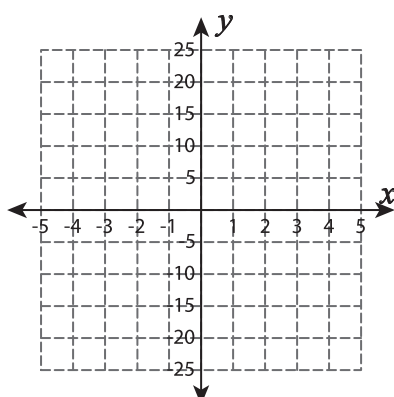
7) $f(x) = -4 + 2x$

x	-2			1	3
$f(x)$		-6	-4		



8) $f(x) = 5x$

x		-4		2	
$f(x)$	-25		0		15



9) $f(x) = 4x - 8$

x	-2		4		8
$f(x)$		-8		16	

