

Opposite Integers

Sheet 1

A) Write the opposite value of each integer.

1) Opposite of 12 _____

2) Opposite of -25 _____

3) Opposite of -99 _____

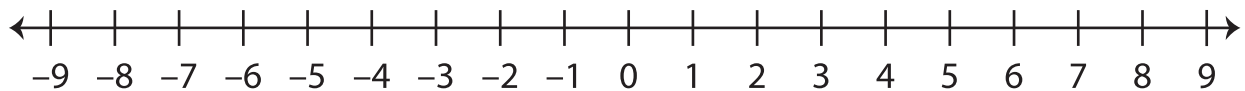
4) Opposite of 4 _____

5) Opposite of 36 _____

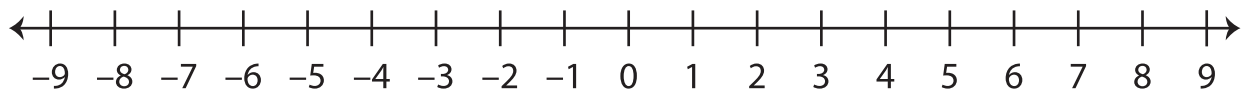
6) Opposite of -57 _____

B) Mark each integer given below and its opposite value on the number line.

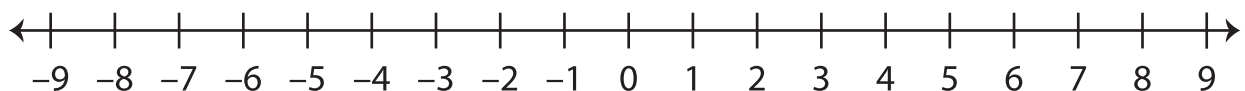
1) 2



2) -5



3) 1



C) Evaluate each expression.

1) Opposite of $-(-24)$ _____2) Opposite of $+(-8)$ _____3) Opposite of $+(+15)$ _____4) Opposite of $-(+33)$ _____5) Opposite of $+(-40)$ _____6) Opposite of $-(-6)$ _____