

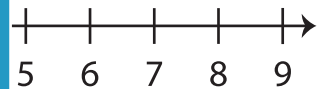
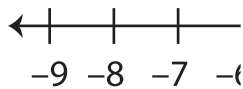
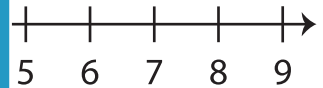
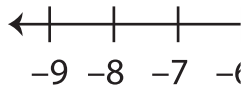
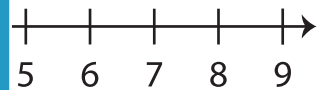
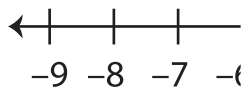
Opposite Integers

Sheet 3

A) Write the opposite value of each integer.

1) Opposite of -86 _____ 2) Opposite of -53 _____3) Opposite of -30 _____ 4) Opposite of 71 _____5) Opposite of 2 _____ 6) Opposite of 28 _____

B) Mark each integer on the number line.

1) 7 2) 3 3) -8 

C) Evaluate each expression.

1) Opposite of $+(+90)$ _____ 2) Opposite of $+(-11)$ _____3) Opposite of $+(-29)$ _____ 4) Opposite of $-(-56)$ _____5) Opposite of $-(-78)$ _____ 6) Opposite of $+(+35)$ _____

PREVIEW

Gain complete access to the largest
collection of worksheets in all subjects!

Members, please
log in to
download this
worksheet.

Not a member?
Please sign up to
gain complete
access.

www.mathworksheets4kids.com