


Unit of Measurement


Choose the best unit of measurement.

1) Height of building



- feet
- inches

2) Depth of swimming pool



- inches
- feet

3) Length of brush



- inches



- inches

5) Height of camel



- inches




- feet

7) Length of pen



- feet
- inches

8) Height of tree



- inches
- feet

PREVIEW

Gain complete access to the largest collection of worksheets in all subjects!

Members, please log in to download this worksheet.

Not a member? Please sign up to gain complete access.


www.mathworksheets4kids.com

Unit of Measurement

Sheet 2


Choose the best unit of measurement.

1) Height of building



- **feet**
- inches

2) Depth of swimming pool



- inches
- **feet**

3) Length of brush



- **inches**

PREVIEW

Gain complete access to the largest collection of worksheets in all subjects!

Members, please log in to download this worksheet.

Not a member? Please sign up to gain complete access.

www.mathworksheets4kids.com



- inches

5) Height of camel



- inches




- feet

7) Length of pen



- feet
- **inches**

8) Height of tree



- inches
- **feet**