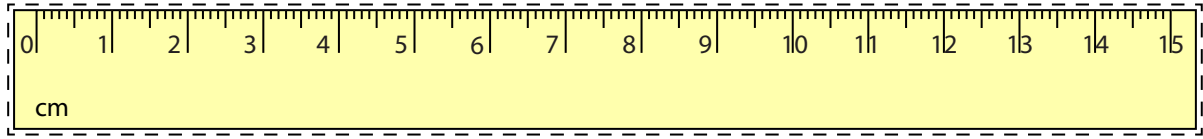



Line Segment - Ruler

Centimeter: S3




Cut out the ruler. Measure the length of each line segment.

1) 


cm

2) 


cm

3) 

cm

4) 

cm

5) 

cm

Draw a line segment for

6) 7 cm

7) 13 cm

8) 2 cm

9) 9 cm

10) 12 cm

PREVIEW

Gain complete access to the largest collection of worksheets in all subjects!

Members, please log in to download this worksheet.

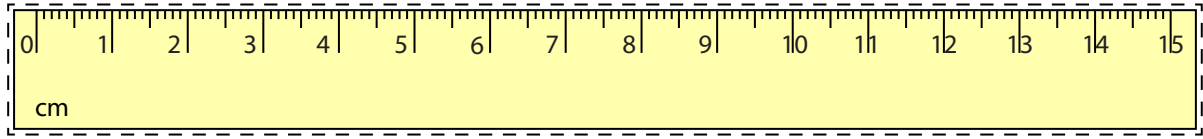
Not a member? Please sign up to gain complete access.

www.mathworksheets4kids.com

Answer Key

Line Segment - Ruler

Centimeter: S3



Cut out the ruler. Measure the length of each line segment.

1)

2 cm

2)

14 cm

3)

8 cm

4)

5 cm

5)

11 cm

Draw a line segment for

6) 7 cm



7) 13 cm



8) 2 cm



9) 9 cm



10) 12 cm



PREVIEW

Gain complete access to the largest collection of worksheets in all subjects!

Members, please
log in to
download this
worksheet.

Not a member?
Please sign up to
gain complete
access.

www.mathworksheets4kids.com