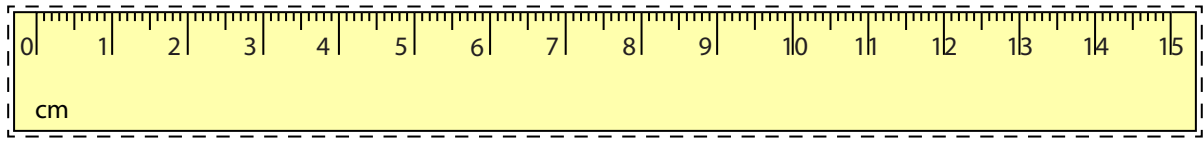



**Line Segment - Ruler**

Millimeter: 51



Cut out the ruler. Measure the length of each line segment.

1)   mm

2)   mm

3)   mm

4)   mm

5)   mm

# PREVIEW

Gain complete access to the largest collection of worksheets in all subjects!

Members, please log in to download this worksheet.

Not a member? Please sign up to gain complete access.

[www.mathworksheets4kids.com](http://www.mathworksheets4kids.com)

Draw a line segment for

6) 49 mm

7) 90 mm

8) 65 mm

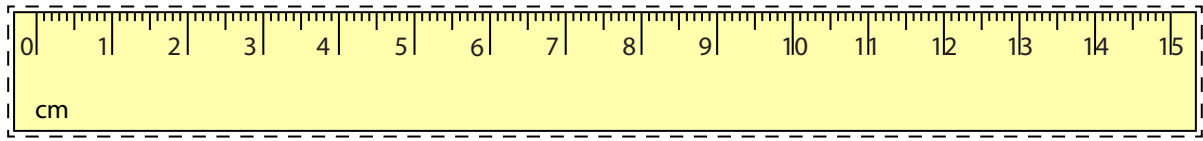
9) 134 mm

10) 70 mm


**Answer Key**

**Line Segment - Ruler**

Millimeter: 51



Cut out the ruler. Measure the length of each line segment.

1)  **85** mm

2)  **100** mm

3)  **142** mm

4)  **58** mm

5)  **120** mm

Draw a line segment for

6) 49 mm 

7) 90 mm 

8) 65 mm 

9) 134 mm 

10) 70 mm 

# PREVIEW

Gain complete access to the largest collection of worksheets in all subjects!

Members, please log in to download this worksheet.

Not a member? Please sign up to gain complete access.

[www.mathworksheets4kids.com](http://www.mathworksheets4kids.com)