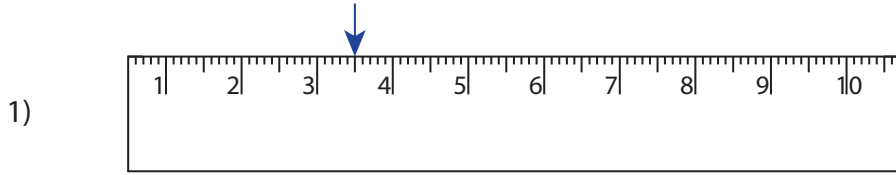
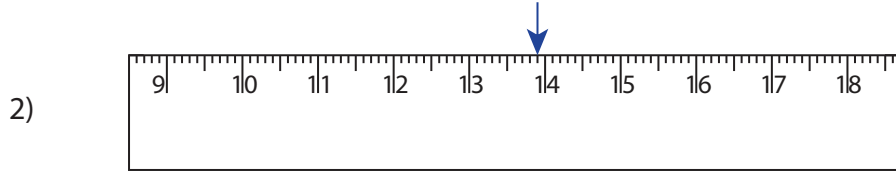


**Reading & Marking Ruler - Decimals**

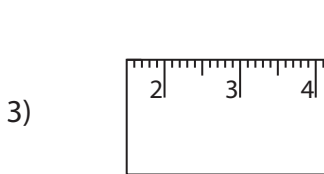
Write the reading shown by the pointer in each problem.



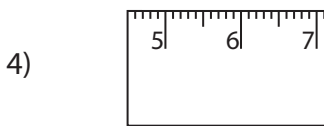
\_\_\_\_\_ cm



\_\_\_\_\_ cm



\_\_\_\_\_ cm



\_\_\_\_\_ cm

**PREVIEW**

Gain complete access to the largest collection of worksheets in all subjects!

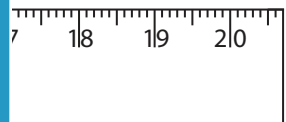
Members, please log in to download this worksheet.

Not a member? Please sign up to gain complete access.

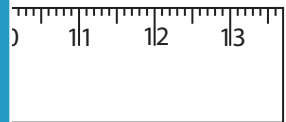
[www.mathworksheets4kids.com](http://www.mathworksheets4kids.com)

Draw the pointer to show


5) 13.8 cm



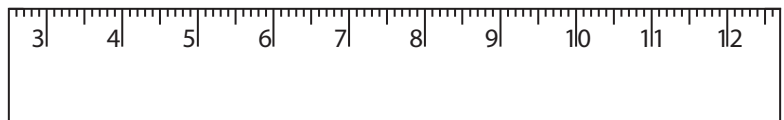
6) 8.3 cm



7) 15.7 cm



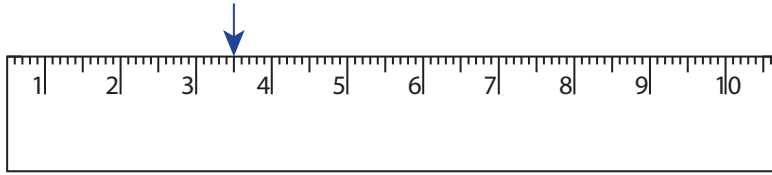
8) 12.1 cm



### Reading & Marking Ruler - Decimals

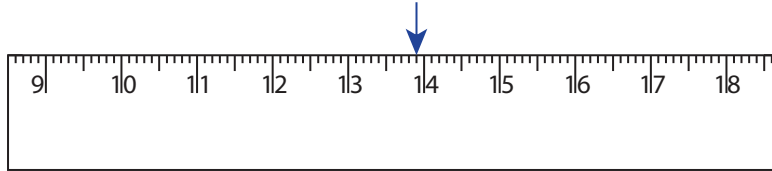
Write the reading shown by the pointer in each problem.

1)



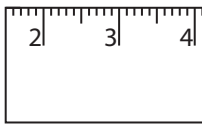
3.5 cm

2)



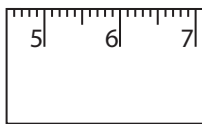
13.9 cm

3)



5.2 cm

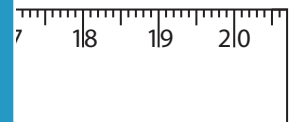
4)




10.6 cm

Draw the pointer to show


5) 13.8 cm



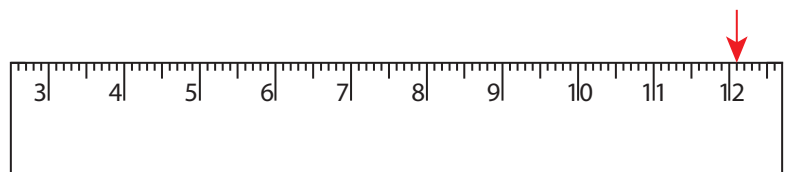
6) 8.3 cm



7) 15.7 cm



8) 12.1 cm



# PREVIEW

Gain complete access to the largest collection of worksheets in all subjects!

Members, please log in to download this worksheet.

Not a member? Please sign up to gain complete access.

[www.mathworksheets4kids.com](http://www.mathworksheets4kids.com)