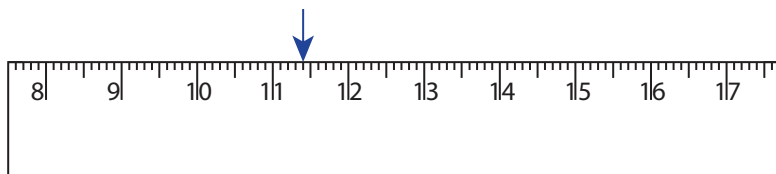


### Reading & Marking Ruler - Decimals


Write the reading shown by the pointer in each problem.

1)



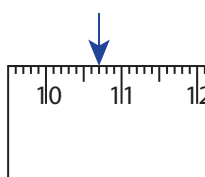
\_\_\_\_\_ cm

2)



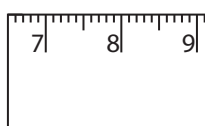
\_\_\_\_\_ cm

3)



\_\_\_\_\_ cm


4)




\_\_\_\_\_ cm

Draw the pointer to show


5) 15.9 cm




6) 8.2 cm



7) 4.6 cm



8) 7.3 cm



# PREVIEW

Gain complete access to the largest  
collection of worksheets in all subjects!

Members, please  
log in to  
download this  
worksheet.

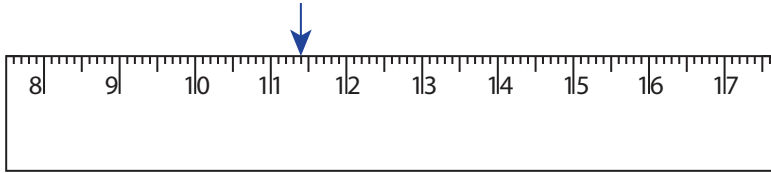
Not a member?  
Please sign up to  
gain complete  
access.

[www.mathworksheets4kids.com](http://www.mathworksheets4kids.com)

### Reading & Marking Ruler - Decimals


Write the reading shown by the pointer in each problem.

1)



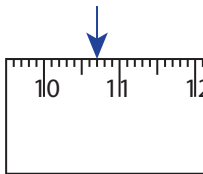
11.4 cm

2)



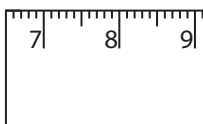
19.8 cm

3)



10.7 cm

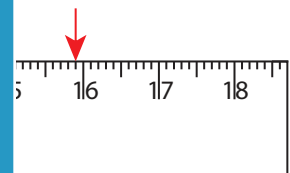
4)



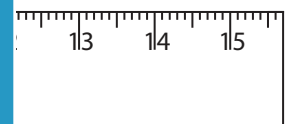
9.5 cm

Draw the pointer to show

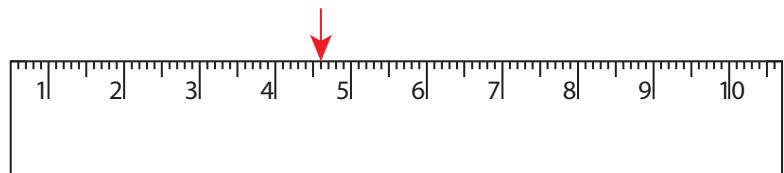
5) 15.9 cm



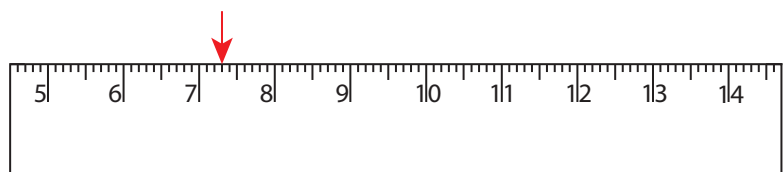
6) 8.2 cm



7) 4.6 cm



8) 7.3 cm



# PREVIEW

Gain complete access to the largest collection of worksheets in all subjects!

Members, please log in to download this worksheet.

Not a member? Please sign up to gain complete access.

[www.mathworksheets4kids.com](http://www.mathworksheets4kids.com)