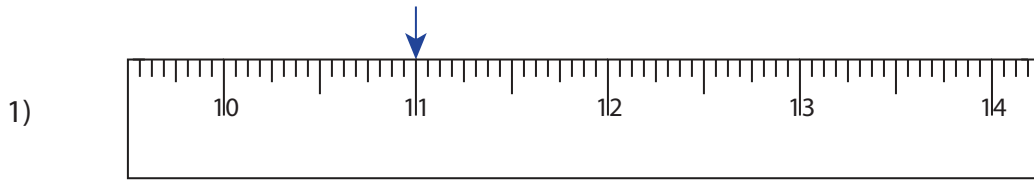


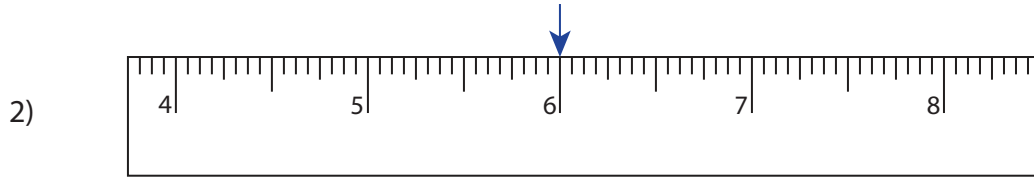
Reading & Marking Ruler

Whole inches: S3

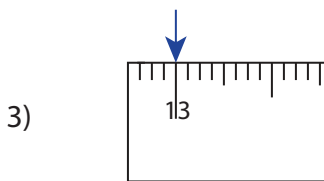
Write the reading shown by the pointer in each problem.



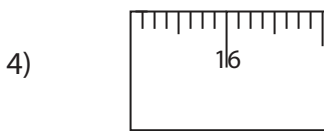
_____ in



_____ in



_____ in



_____ in

PREVIEW

Gain complete access to the largest collection of worksheets in all subjects!

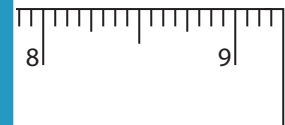
Members, please log in to download this worksheet.

Not a member? Please sign up to gain complete access.

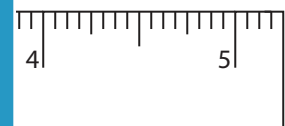
www.mathworksheets4kids.com

Draw the pointer to show

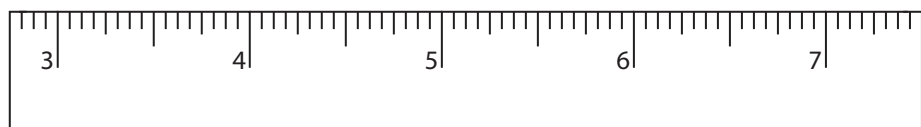
5) 7 in



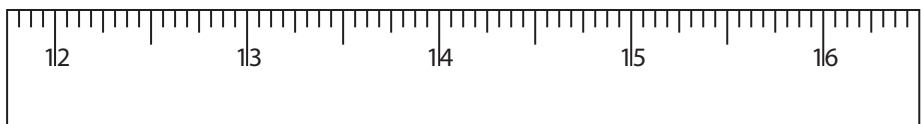
6) 3 in



7) 5 in



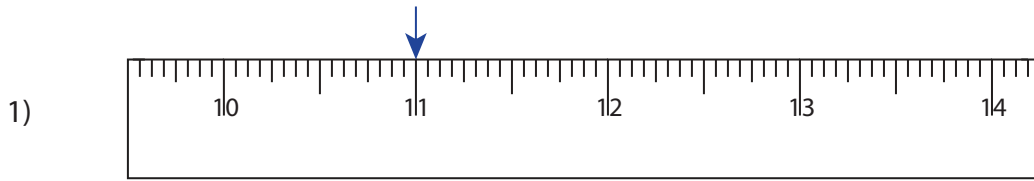
8) 14 in



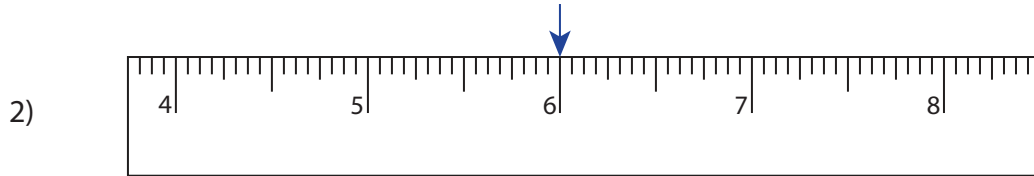
Reading & Marking Ruler

Whole inches: S3

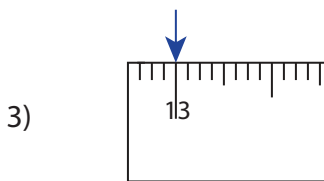
Write the reading shown by the pointer in each problem.



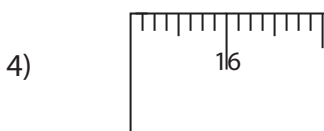
11 in



6 in



13 in



18 in

PREVIEW

Gain complete access to the largest collection of worksheets in all subjects!

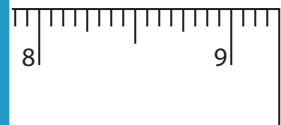
Members, please log in to download this worksheet.

Not a member? Please sign up to gain complete access.

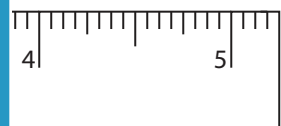
www.mathworksheets4kids.com

Draw the pointer to show

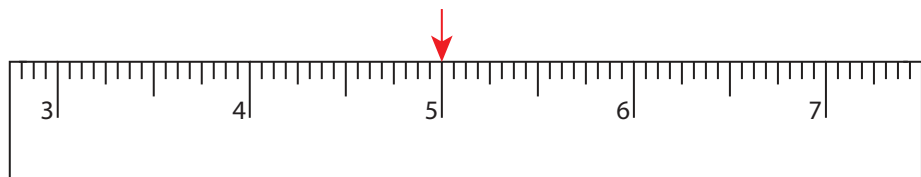
5) 7 in



6) 3 in



7) 5 in



8) 14 in

