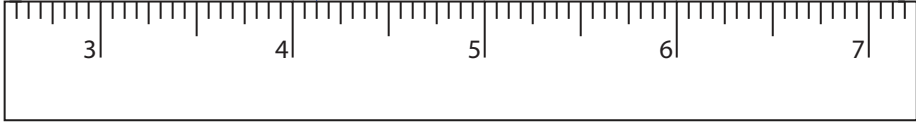
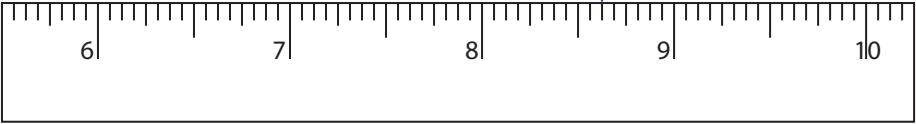


Reading & Marking Ruler

One-Sixteenth: S3

Write the reading shown by the pointer in each problem.

1)  _____ in

2)  _____ in

3)  _____ in

4)  _____ in

PREVIEW

Gain complete access to the largest collection of worksheets in all subjects!

Members, please log in to download this worksheet.

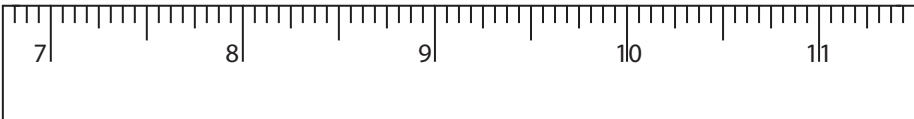
Not a member? Please sign up to gain complete access.

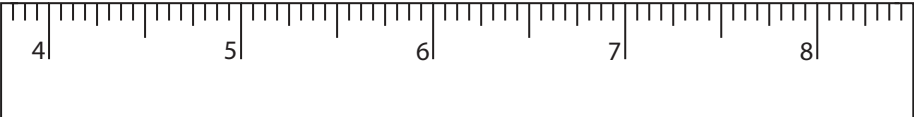
www.mathworksheets4kids.com

Draw the pointer to show

5) $18 \frac{5}{16}$ in 

6) $11 \frac{11}{16}$ in 

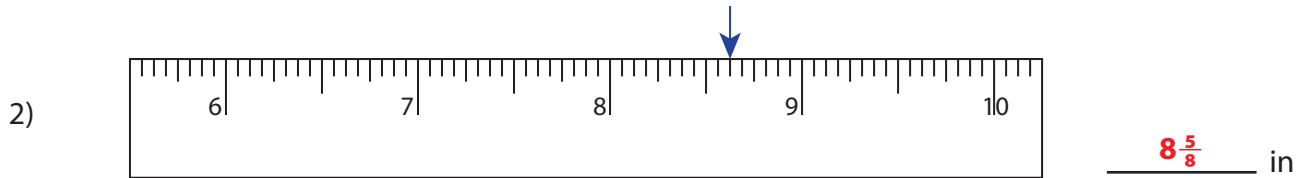
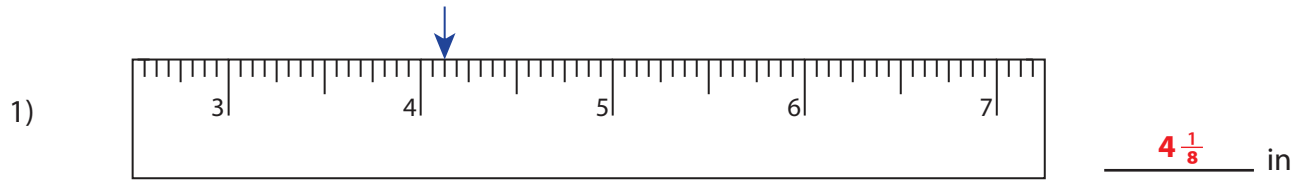
7) $9 \frac{3}{8}$ in 

8) $6 \frac{3}{8}$ in 

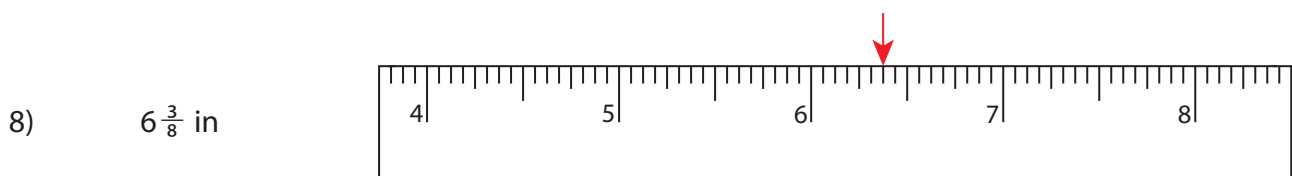
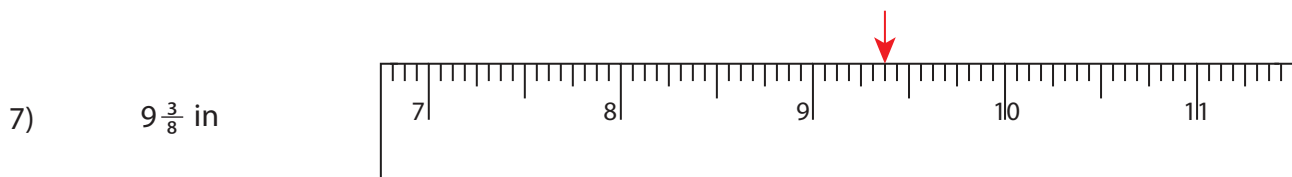
Reading & Marking Ruler

One-Sixteenth: S3

Write the reading shown by the pointer in each problem.



Draw the pointer to show



PREVIEW

Gain complete access to the largest collection of worksheets in all subjects!

Members, please log in to download this worksheet.

Not a member? Please sign up to gain complete access.

www.mathworksheets4kids.com