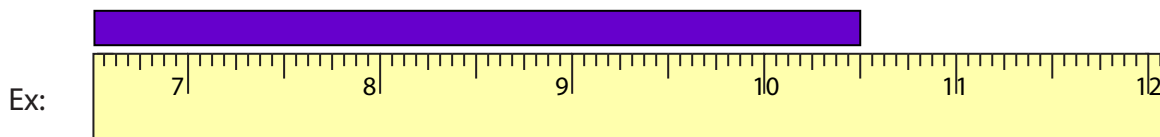


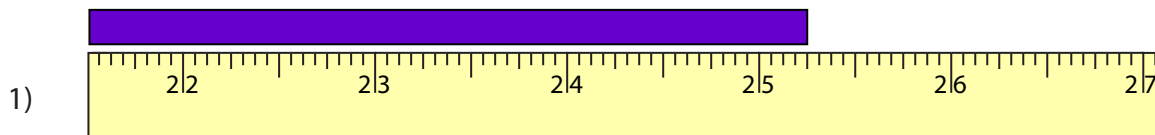
**Reading Tapes**

Halves and Quarters: S1

Measure the length of each bar.



\_\_\_\_\_  $10 \frac{1}{2}$  in



\_\_\_\_\_ in



\_\_\_\_\_ in



\_\_\_\_\_ in



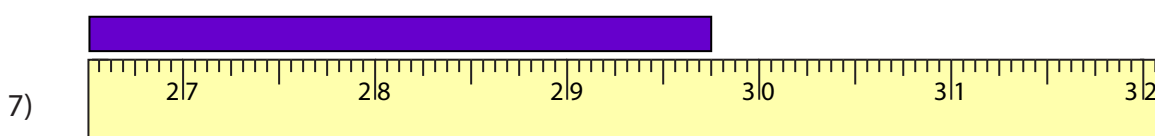
\_\_\_\_\_ in



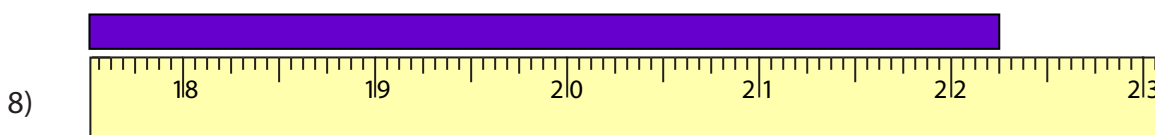
\_\_\_\_\_ in



\_\_\_\_\_ in



\_\_\_\_\_ in



\_\_\_\_\_ in

**PREVIEW**

Gain complete access to the largest collection of worksheets in all subjects!

Members, please log in to download this worksheet.

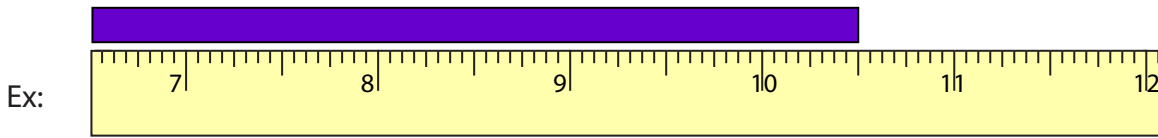
Not a member? Please sign up to gain complete access.

[www.mathworksheets4kids.com](http://www.mathworksheets4kids.com)

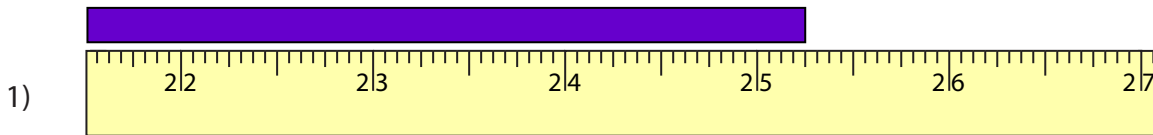
Reading Tapes

Halves and Quarters: S1

Measure the length of each bar.



10  $\frac{1}{2}$  in



25  $\frac{1}{4}$  in



46  $\frac{1}{2}$  in



16  $\frac{3}{4}$  in



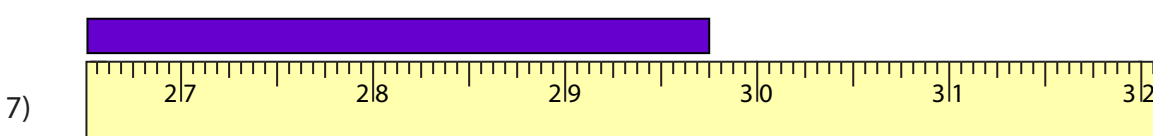
32  $\frac{1}{4}$  in



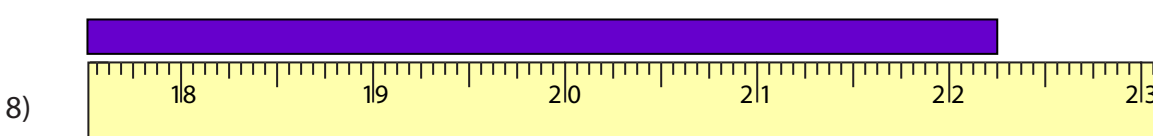
12  $\frac{3}{4}$  in



19  $\frac{1}{2}$  in



29  $\frac{3}{4}$  in



22  $\frac{1}{4}$  in

**PREVIEW**

Gain complete access to the largest collection of worksheets in all subjects!

Members, please log in to download this worksheet.

Not a member? Please sign up to gain complete access.

[www.mathworksheets4kids.com](http://www.mathworksheets4kids.com)