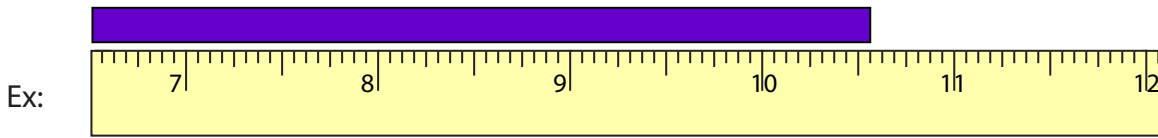


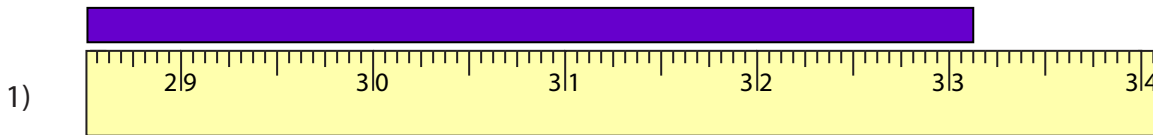
Reading Tapes

One-sixteenth: S2

Measure the length of each bar.



_____ $10 \frac{9}{16}$ in



_____ in



_____ in



_____ in



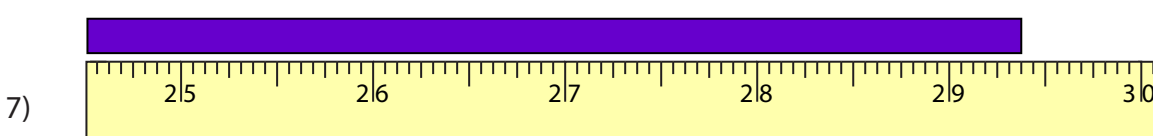
_____ in



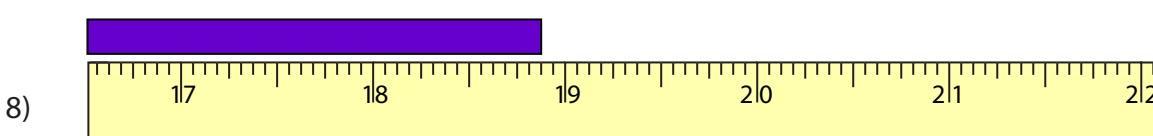
_____ in



_____ in



_____ in



_____ in

PREVIEW

Gain complete access to the largest collection of worksheets in all subjects!

Members, please log in to download this worksheet.

Not a member? Please sign up to gain complete access.

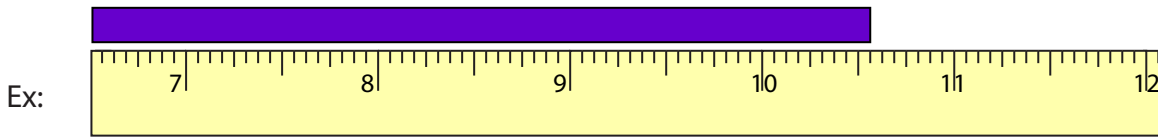
www.mathworksheets4kids.com

Answer key

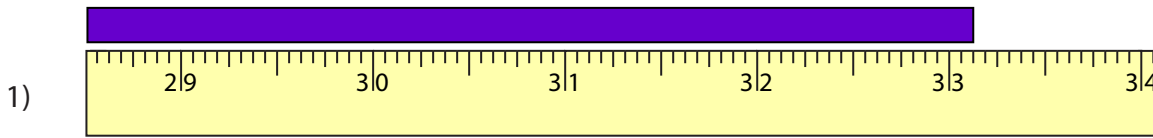
Reading Tapes

One-sixteenth: S2

Measure the length of each bar.



10 ⁹/₁₆ in



33 ¹/₈ in



49 ⁵/₁₆ in



13 ¹⁵/₁₆ in



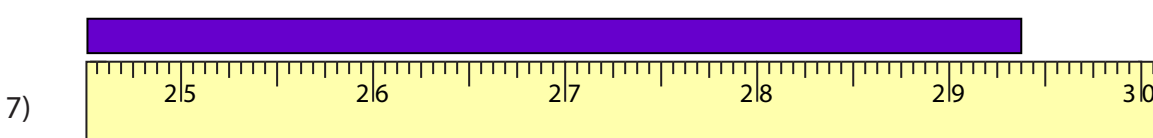
33 ⁵/₈ in



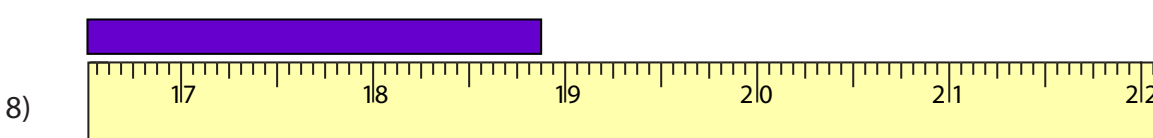
11 ¹/₁₆ in



20 ⁹/₁₆ in



29 ³/₈ in



18 ⁷/₈ in

PREVIEW

Gain complete access to the largest collection of worksheets in all subjects!

Members, please log in to download this worksheet.

Not a member? Please sign up to gain complete access.

www.mathworksheets4kids.com