




**Lines, Rays or Line segments**

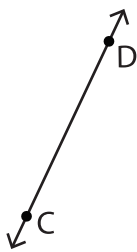
Example:

<p><b>A Line</b></p>  <p><math>\overleftrightarrow{KL}</math> or <math>\overleftrightarrow{LK}</math></p>	<p><b>A Ray</b></p>  <p><math>\overrightarrow{AB}</math></p>	<p><b>A Line segment</b></p>  <p><math>\overline{PQ}</math> or <math>\overline{QP}</math></p>
--	---	--

**Part - A**

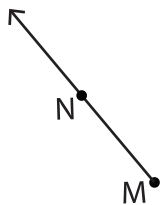
Name each line, ray or line segment.

1)

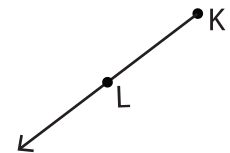


\_\_\_\_\_

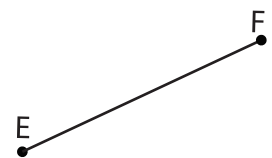
4)



\_\_\_\_\_



\_\_\_\_\_



\_\_\_\_\_

# PREVIEW

Gain complete access to the largest collection of worksheets in all subjects!

Members, please log in to download this worksheet.

Not a member? Please sign up to gain complete access.

[www.mathworksheets4kids.com](http://www.mathworksheets4kids.com)

Draw and label each of the following.

1)  $\overline{YZ}$

2)  $\overleftrightarrow{AB}$

3)  $\overrightarrow{GH}$