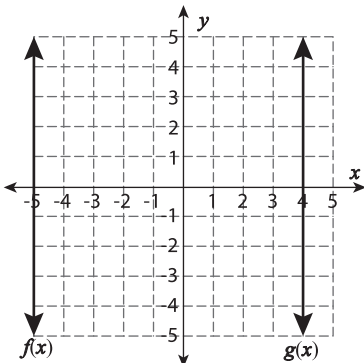


MCQ

If $g(x)$ is the translation of $f(x)$, Identify the translation.

1)



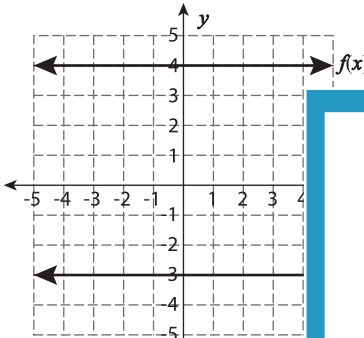
a) 9 units right

b) 10 units right

c) 10 units left

d) 9 units left

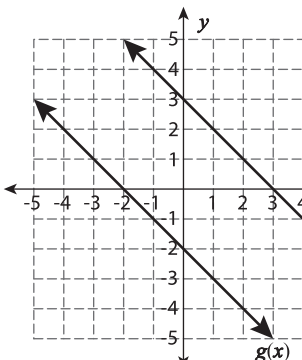
2)



) 8 units left

) 7 units down

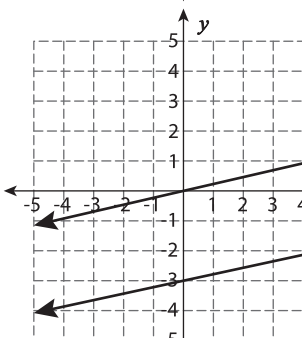
3)



) 5 units left

) 4 units down

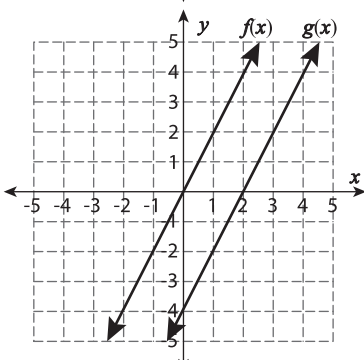
4)



) 3 units down

) 4 units left

5)



a) 2 units right

b) 6 units down

c) 4 units up

d) 2 units left

PREVIEW

Gain complete access to the largest collection of worksheets in all subjects!

Members, please log in to download this worksheet.

Not a member? Please sign up to gain complete access.

www.mathworksheets4kids.com