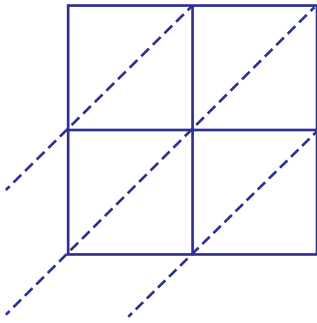


Lattice Multiplication

2-digit : S1

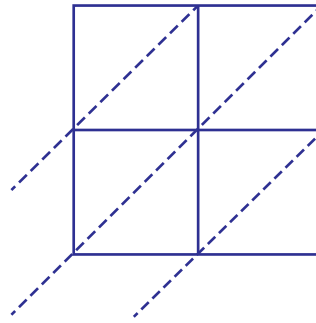
Use lattice multiplication method to find the product in each problem.

1) 45×68



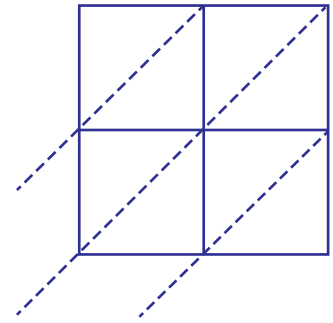
$45 \times 68 =$ _____

2) 18×72



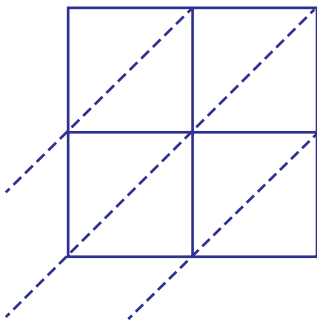
$18 \times 72 =$ _____

3) 36×24



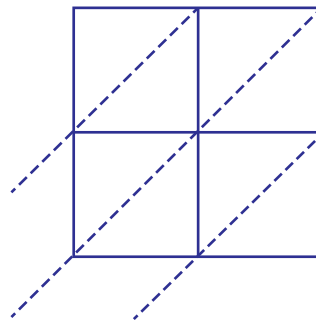
$36 \times 24 =$ _____

4) 79×35



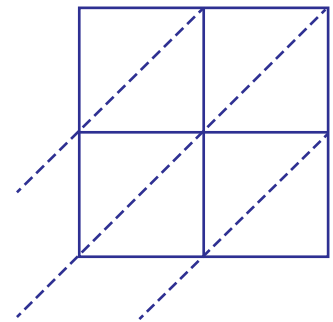
$79 \times 35 =$ _____

5) 54×49



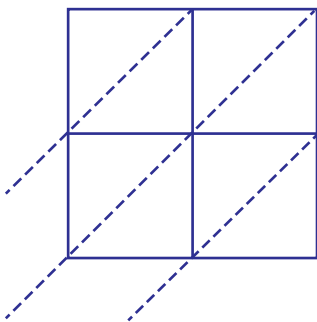
$54 \times 49 =$ _____

6) 98×17



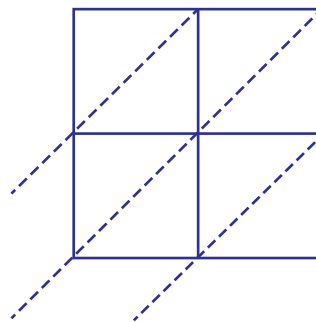
$98 \times 17 =$ _____

7) 21×59



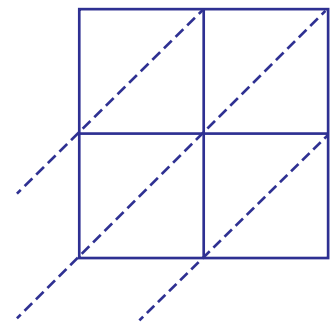
$21 \times 59 =$ _____

8) 80×92



$80 \times 92 =$ _____

9) 63×86



$63 \times 86 =$ _____