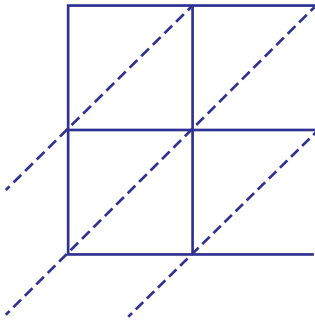


Lattice Multiplication

2-digit : S3

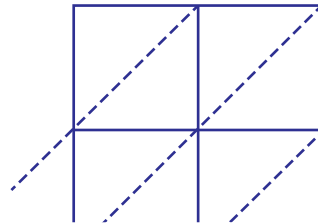
Use lattice multiplication method to find the product in each problem.

1) 14×67

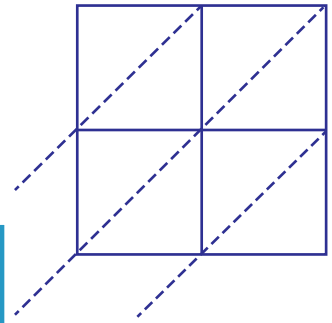


$14 \times 67 =$ _____

2) 91×30

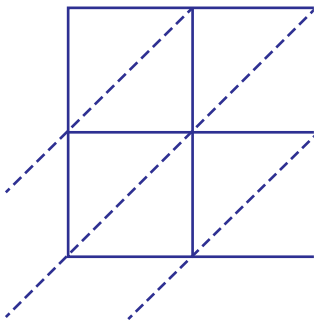


3) 43×72



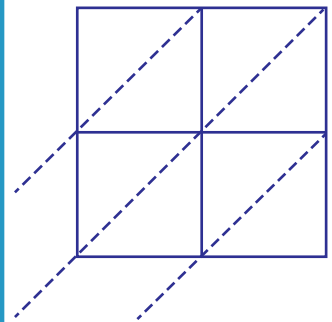
$43 \times 72 =$ _____

4) 79×53



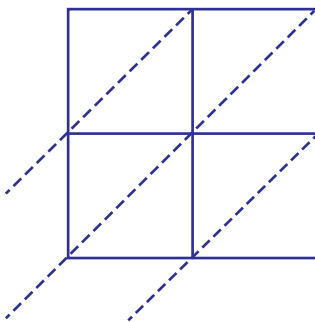
$79 \times 53 =$ _____

6) 61×44

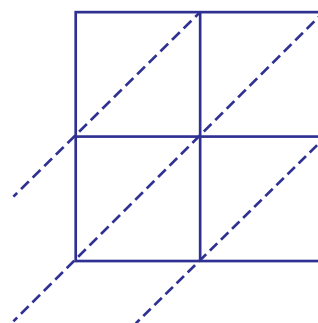


$61 \times 44 =$ _____

7) 34×95

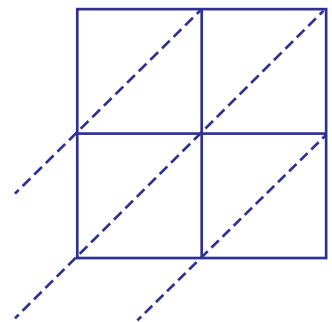


$34 \times 95 =$ _____



$52 \times 18 =$ _____

8) 83×29



$83 \times 29 =$ _____

PREVIEWGain complete access to the largest
collection of worksheets in all subjects!Members, please
log in to
download this
worksheet.Not a member?
Please sign up to
gain complete
access.www.mathworksheets4kids.com