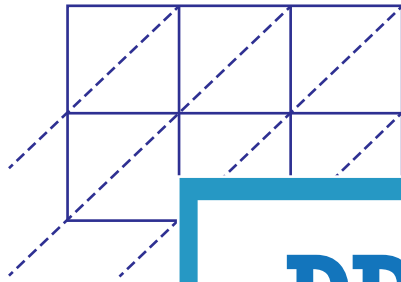


Lattice Multiplication

3-digit by 2-digit: S3

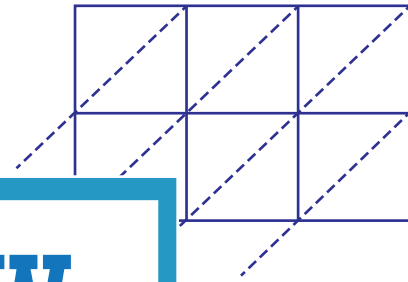
Use lattice multiplication method to find the product in each problem.

1) 159×83



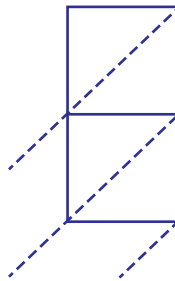
159×83

2) 782×24

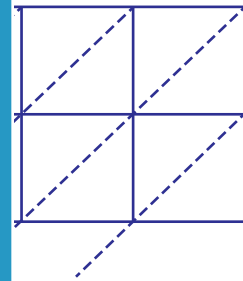


= _____

3) 823×40

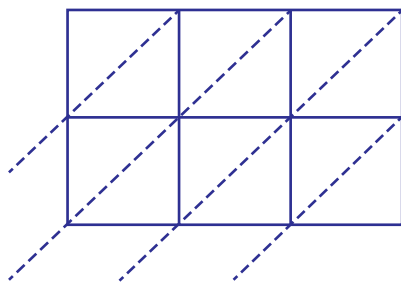


823×40

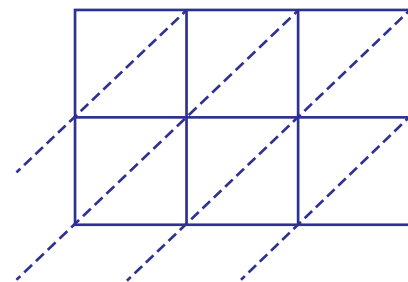


) = _____

5) 367×51



$367 \times 51 =$ _____



$518 \times 67 =$ _____

PREVIEW

Gain complete access to the largest
collection of worksheets in all subjects!

Members, please
log in to
download this
worksheet.

Not a member?
Please sign up to
gain complete
access.

www.mathworksheets4kids.com