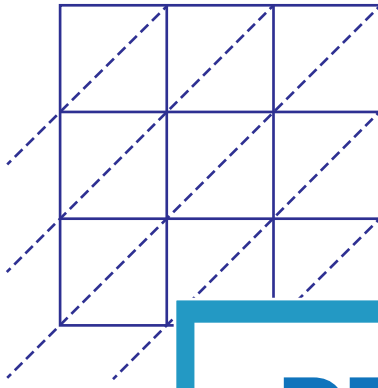


Lattice Multiplication

3-digit: S1

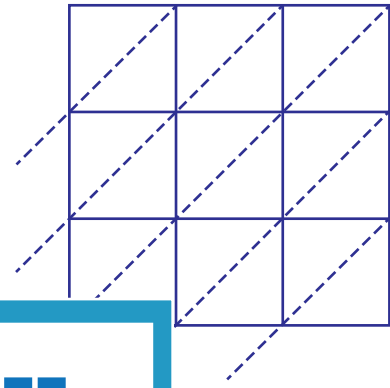
Use lattice multiplication method to find the product in each problem.

1) 276×814



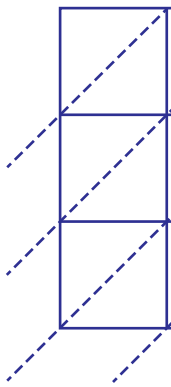
276×814

2) 790×153



$790 \times 153 =$ _____

3) 927×340



927×340

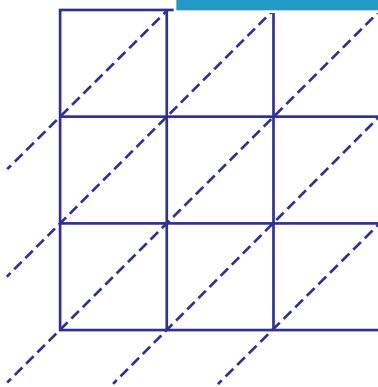
**Gain complete access to the largest
collection of worksheets in all subjects!**

Members, please
log in to
download this
worksheet.

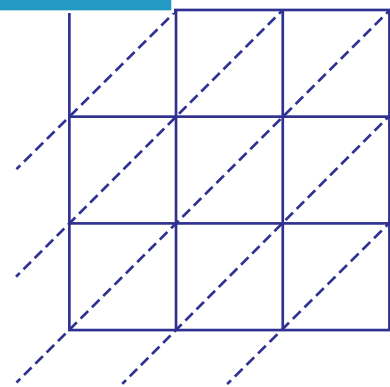
Not a member?
Please sign up to
gain complete
access.

927×340

5) 135×593



$135 \times 593 =$ _____



$462 \times 617 =$ _____