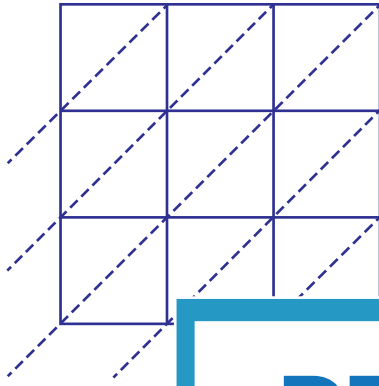


Lattice Multiplication

3-digit: S4

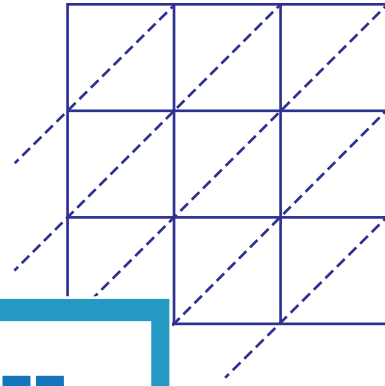
Use lattice multiplication method to find the product in each problem.

1) 756×495



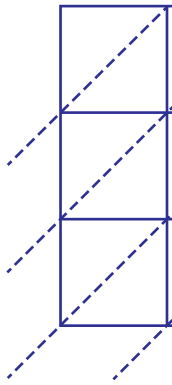
$756 \times 495 =$ _____

2) 291×649



$291 \times 649 =$ _____

3) 157×864



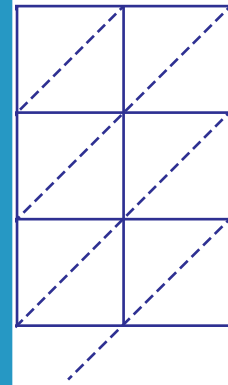
$157 \times 864 =$ _____

PREVIEW

Gain complete access to the largest
collection of worksheets in all subjects!

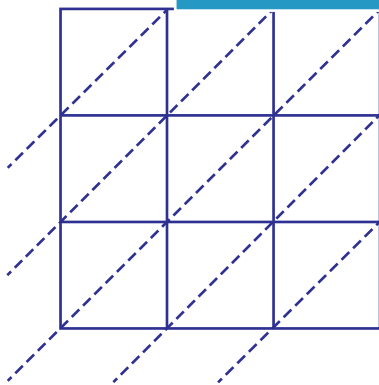
Members, please
log in to
download this
worksheet.

Not a member?
Please sign up to
gain complete
access.

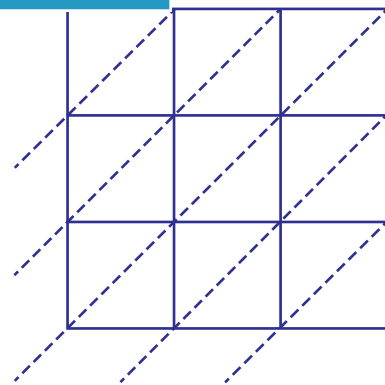


$157 \times 864 =$ _____

5) 420×936



$420 \times 936 =$ _____



$685 \times 371 =$ _____