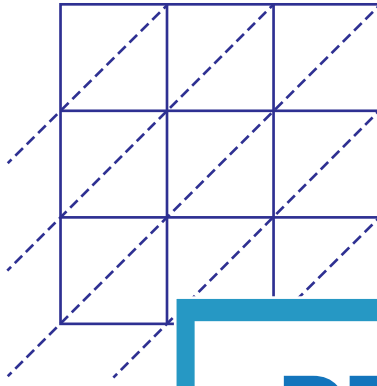


Lattice Multiplication

3-digit: S5

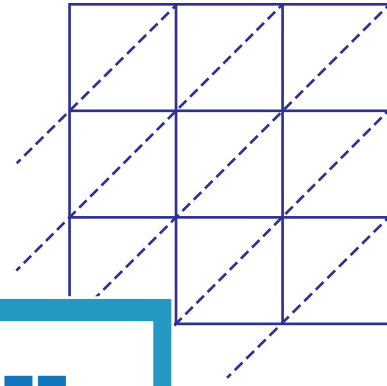
Use lattice multiplication method to find the product in each problem.

1) 820×546



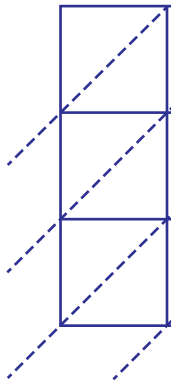
820×546

2) 164×372



$164 \times 372 =$ _____

3) 316×950



316×950

PREVIEW

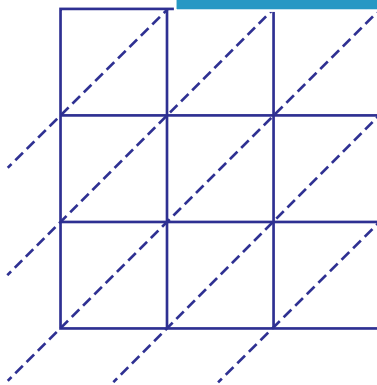
Gain complete access to the largest
collection of worksheets in all subjects!

Members, please
log in to
download this
worksheet.

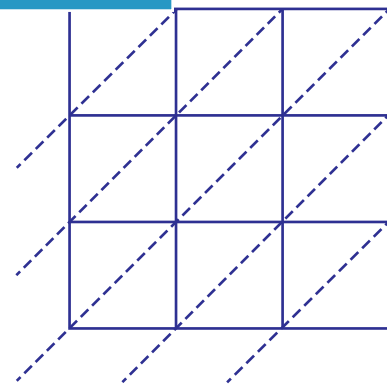
Not a member?
Please sign up to
gain complete
access.

$316 \times 950 =$ _____

5) 678×481



$678 \times 481 =$ _____



$539 \times 713 =$ _____