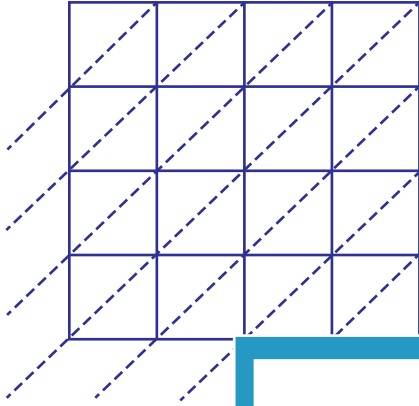


Lattice Multiplication

4-digit: S2

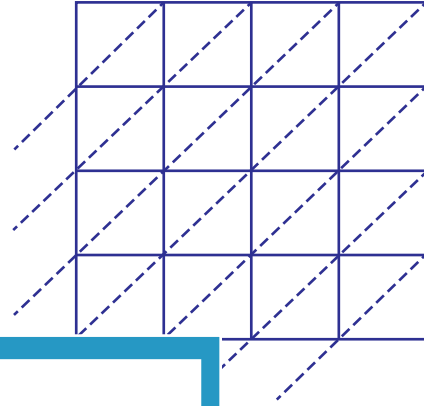
Use lattice multiplication method to find the product in each problem.

1) 5124×8541

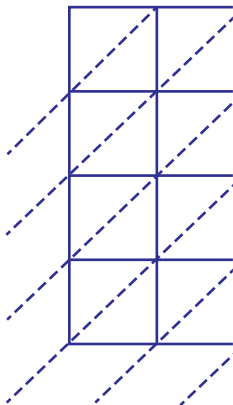


$5124 \times 8541 =$ _____

2) 9657×2983

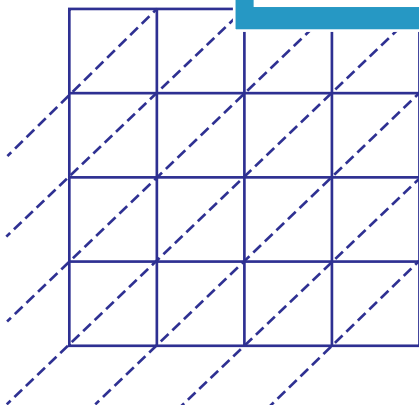


3) 7652×3645



$7652 \times 3645 =$ _____

5) 1249×6213



$1249 \times 6213 =$ _____

PREVIEW

Gain complete access to the largest
collection of worksheets in all subjects!

Members, please
log in to
download this
worksheet.

Not a member?
Please sign up to
gain complete
access.

www.mathworksheets4kids.com