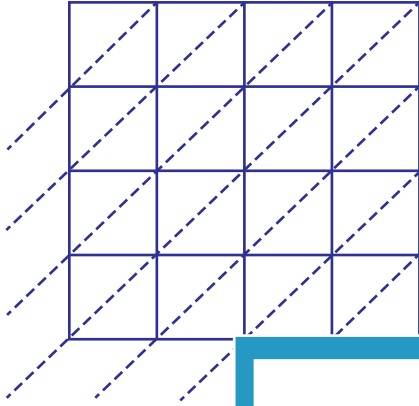


Lattice Multiplication

4-digit: S3

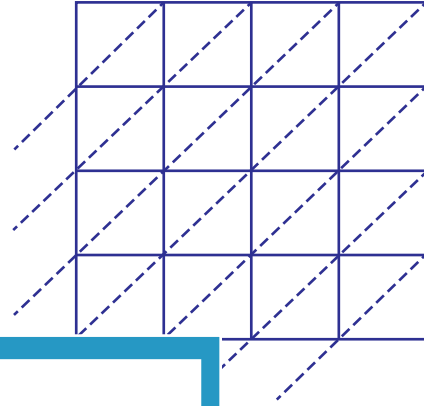
Use lattice multiplication method to find the product in each problem.

1) 7321×1589

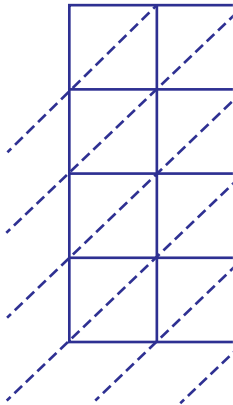


$7321 \times 1589 =$ _____

2) 4595×5878

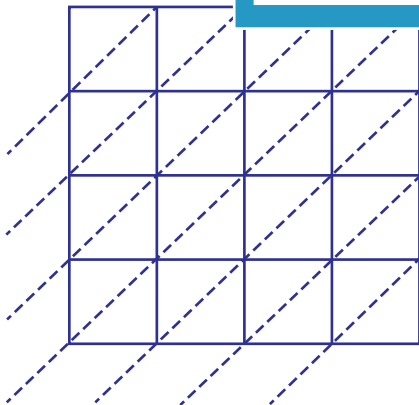


3) 1123×4987



$1123 \times 4987 =$ _____

5) 6314×8791



$6314 \times 8791 =$ _____

$5027 \times 3469 =$ _____

PREVIEW

Gain complete access to the largest
collection of worksheets in all subjects!

Members, please
log in to
download this
worksheet.

Not a member?
Please sign up to
gain complete
access.

www.mathworksheets4kids.com