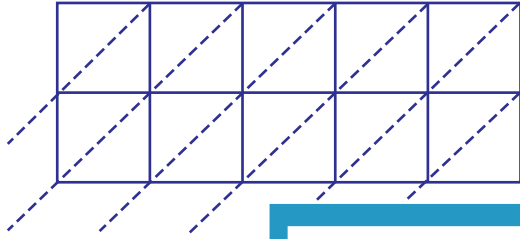


## Lattice Multiplication

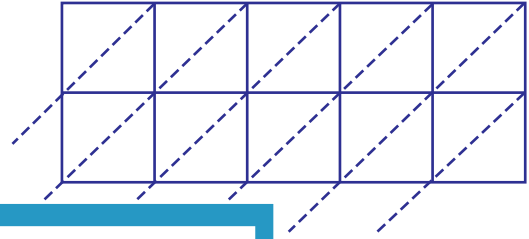
5-digit by 2-digit: S3

Use lattice multiplication method to find the product in each problem.

1)  $46571 \times 65$



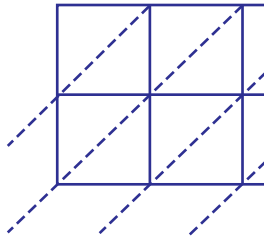
2)  $84156 \times 10$



$46571 \times 65 =$  \_\_\_\_\_

# PREVIEW

3)  $95482 \times 73$



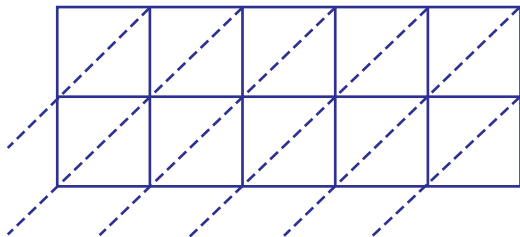
Gain complete access to the largest  
collection of worksheets in all subjects!

Members, please  
log in to  
download this  
worksheet.

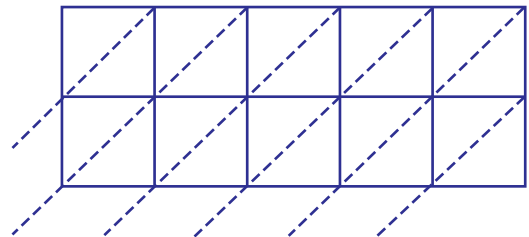
Not a member?  
Please sign up to  
gain complete  
access.

$95482 \times 73 =$  \_\_\_\_\_

5)  $51240 \times 91$



$51240 \times 91 =$  \_\_\_\_\_



$65234 \times 26 =$  \_\_\_\_\_