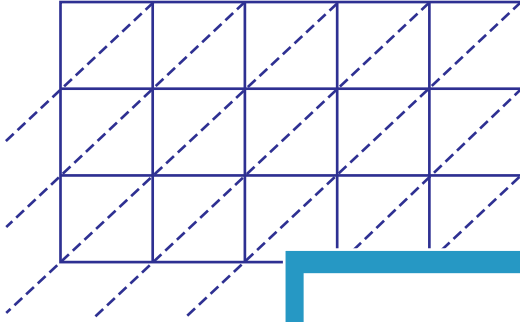


Lattice Multiplication

5-digit by 3-digit: S3

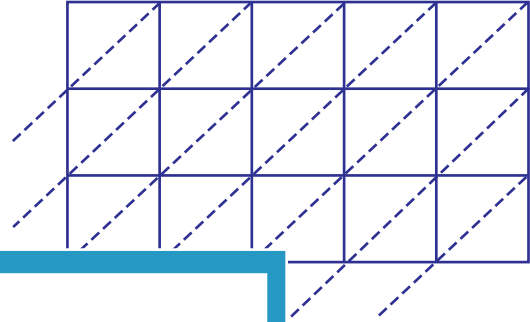
Use lattice multiplication method to find the product in each problem.

1) 89412×100



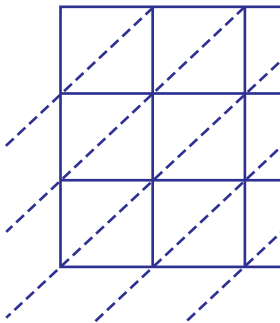
$89412 \times 100 =$ _____

2) 30989×475



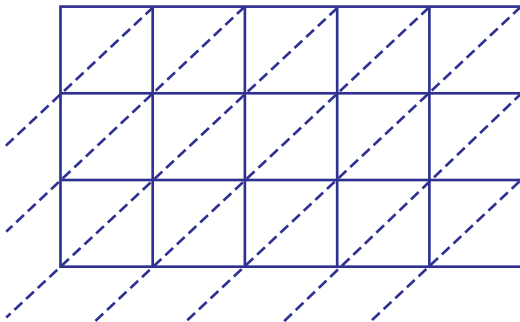
$30989 \times 475 =$ _____

3) 46231×645

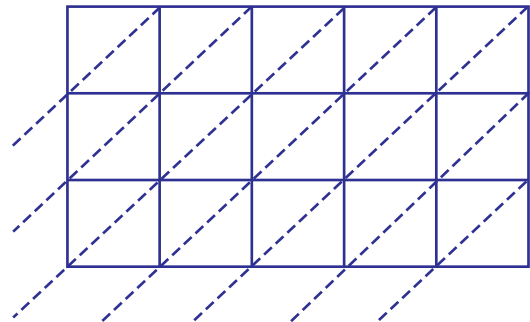


$46231 \times 645 =$ _____

5) 94783×793



$94783 \times 793 =$ _____



$76430 \times 236 =$ _____

PREVIEW

Gain complete access to the largest
collection of worksheets in all subjects!

Members, please
log in to
download this
worksheet.

Not a member?
Please sign up to
gain complete
access.

www.mathworksheets4kids.com