



## Odd or Even: Race Horses

Look at the number on each race horse. Write odd or even.


1)



2)



3)




# PREVIEW

Gain complete access to the largest collection of worksheets in all subjects!



Members, please log in to download this worksheet.

Not a member? Please sign up to gain complete access.

[www.mathworksheets4kids.com](http://www.mathworksheets4kids.com)



5)



7)



8)

