

Name : _____

Ordered Pairs

All quadrants: S2



PREVIEW

Gain complete access to the largest collection of worksheets in all subjects!






Members, please log in to download this worksheet.

Not a member? Please sign up to gain complete access.

www.mathworksheets4kids.com

A) Write the ordered pair for

each item plotted at each ordered pair.

- 1)  _____
 - 2)  _____
 - 3)  _____
 - 4)  _____
 - 5)  _____
- 1) (3, 2) _____
 - 8) (0, 4) _____
 - 9) (3, -4) _____
 - 10) (-4, 3) _____