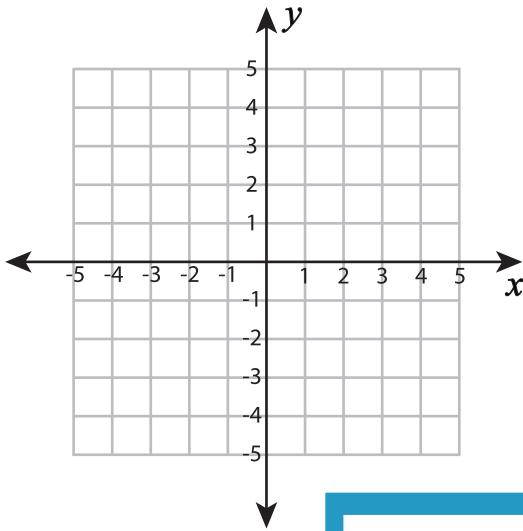


Plotting Points - Line segments

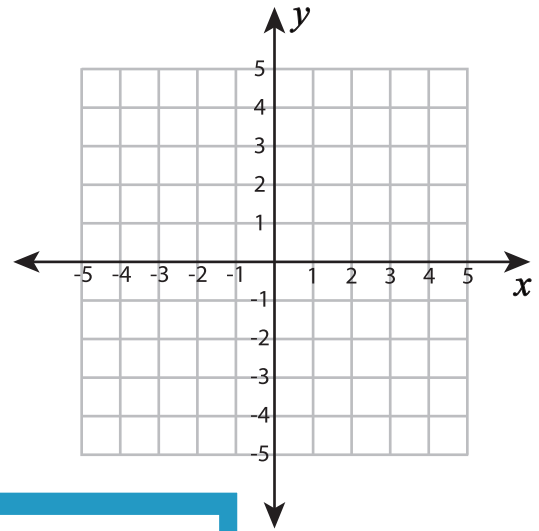
Plot each set of ordered pairs. Join the points and find the length of the line segment.

1) $(3, -1), (3, 4)$



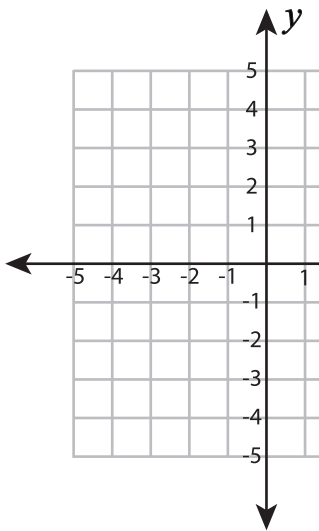
Length of the line segment = _____

2) $(-4, 1), (4, 1)$

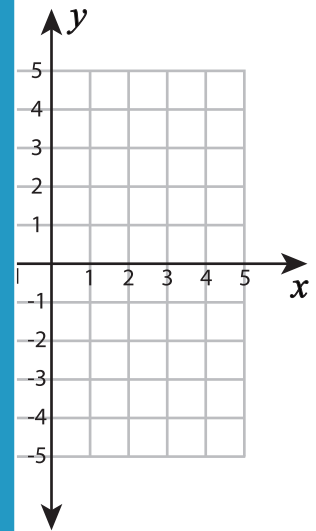


Length of the line segment = _____

3) $(-3, 1), (-3, 4)$



Length of the line segment = _____



Length of the line segment = _____

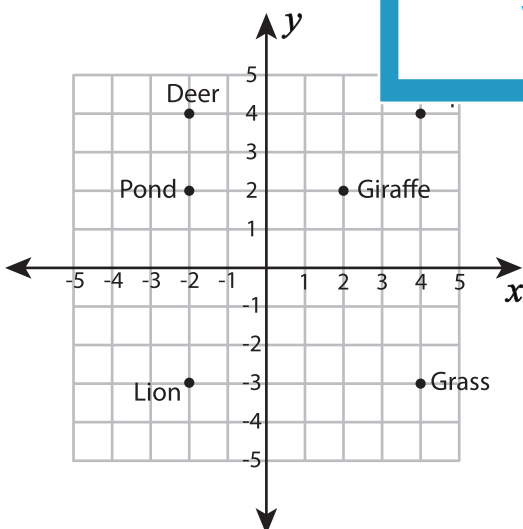
PREVIEW

Gain complete access to the largest collection of worksheets in all subjects!

Members, please log in to download this worksheet.

Not a member? Please sign up to gain complete access.

www.mathworksheets4kids.com



6) Which is closer to the pond, giraffe or deer? _____

7) How many units does the lion move to catch the grass? _____