



Name : _____


Points and Planes


Sheet 1

A) Does the given set of points determine a plane? Circle yes or no.

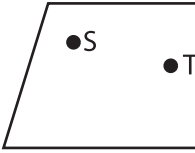
1) 
Yes No

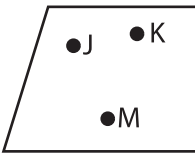
2) 
Yes No

3) 
Yes

4) 
No

B) Choose whether the points are coplanar or not coplanar.

1) 
a) Not coplanar
b) Coplanar

3) 
a) Coplanar
b) Not coplanar

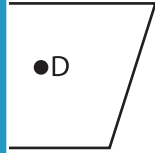
PREVIEW


Gain complete access to the largest collection of worksheets in all subjects!

Members, please log in to download this worksheet.

Not a member? Please sign up to gain complete access.

www.mathworksheets4kids.com


coplanar
anar


anar
b) NOT coplanar

C) Draw and label each of the following.

1) Three coplanar points D, E and F in plane \mathcal{R}

2) Points W, X, Y and Z are collinear in plane \mathcal{A}