

Name : _____

Points and Planes

Sheet 2

A) Does the given set of points determine a plane? Circle yes or no.

1)

•P •Q •R •S

Yes No

2)

X Y
• •
 •Z

Yes No

3)

E
•
A •B •D
• • •

Yes

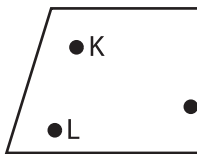
4)

•M

No

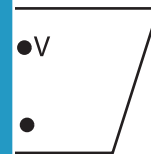
B) Choose whether the points are coplanar or not coplanar.

1)



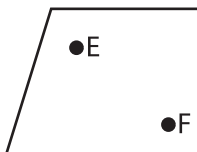
- a) Coplanar
b) Not coplanar

Gain complete access to the largest collection of worksheets in all subjects!

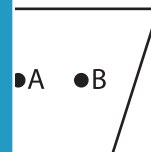


- a) Coplanar
b) Not coplanar

3)



- a) Not coplanar
b) Coplanar



- a) Coplanar
b) Coplanar

C) Draw and label each of the following.

1) Point R which is not coplanar to points P and Q in plane \mathcal{M}

2) Coplanar lines t and r in plane \mathcal{B}

PREVIEW

Members, please log in to download this worksheet.

Not a member? Please sign up to gain complete access.

www.mathworksheets4kids.com