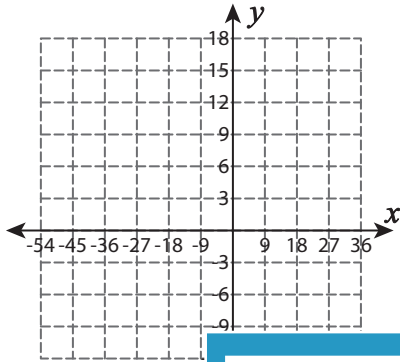


Proportional Relationship

Use the graph to tell whether x and y are in proportional relationship.

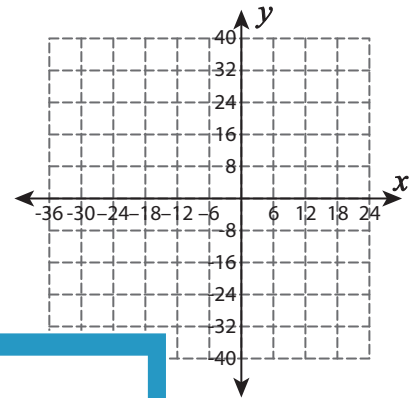
1)

x	-54	-45	-36	-27	-18
y	6	3	0	-3	-6



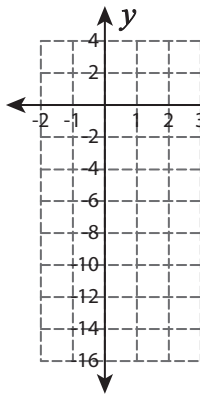
2)

x	-24	-12	-6	12	18
y	32	16	8	-16	-24

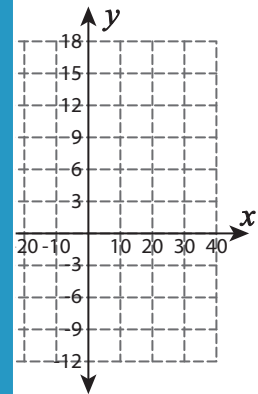


3)

x	-1	1
y	2	-2

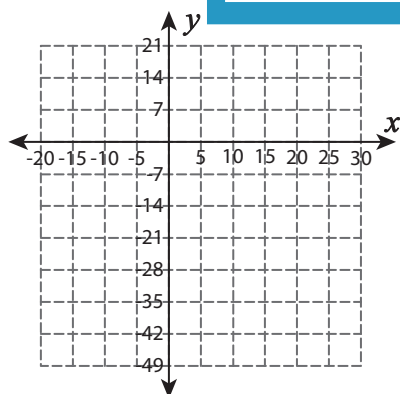


20	-10	10	20
6	0	6	9

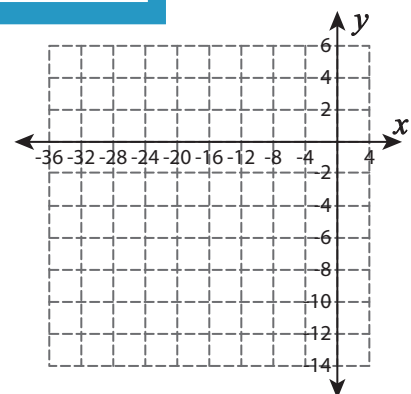


5)

x	-10	5
y	-28	-28



20	-12	-8	4
10	-6	-4	2



PREVIEW

Gain complete access to the largest collection of worksheets in all subjects!

Members, please log in to download this worksheet.

Not a member? Please sign up to gain complete access.

www.mathworksheets4kids.com